



Name _____ Class _____ Date _____

1 What number is **missing**?
 $22 + \square = 66$

- A 11
- B 22
- C 33
- D 44

2 What is the **missing** number?
 $3 + \square = 12$

- A 9
- B 10
- C 11
- D 12

3 Which **number** completes this number sentence?
 $17 - \square = 12$

4 Complete the number sentence.
 $24 - \square = 12$

- A 11
- B 12
- C 13
- D 14

5



PREVIEW

Please [Sign In](#) or [Sign Up](#) to download the printable version of this worksheet

7

- B 16
- C 19
- D 20

- A 10
- B 20
- C 25
- D 30

9 Complete the number sentence.
 $\square + 6 = 13$

- A 6
- B 7
- C 8
- D 9



10 What number is **missing**?
 $8 + \square = 17$




- A 8
- B 9
- C 10
- D 11





Name _____ Class _____ Date _____

1 What number is **missing**?
 $22 + \square = 66$

- A  11
- B  22
- C  33
- D  44

2 What is the **missing** number?
 $3 + \square = 12$

- A 9
- B 10
- C 11
- D 12

3 Which **number** completes this number sentence?
 $17 - \square = 12$

(C)

4 Complete the number sentence.
 $24 - \square = 12$

- A 11
- B 12
- C 13
- D 14



PREVIEW

Please [Sign In](#) or [Sign Up](#) to download the printable version of this worksheet

- B 16
- C 19
- D 20

- A 10
- B 20
- C 25
- D 30

9 Complete the number sentence.
 $\square + 6 = 13$

- A 6
- B 7
- C 8
- D 9



10 What number is **missing**?
 $8 + \square = 17$

- A 8
- B 9
- C 10
- D 11

