



Name _____ Class _____ Date _____

1 The **perimeter** of this square is 36 cm. What is the length of one side?
_____cm

- A 4 cm
- B 8 cm
- C 9 cm
- D 36 cm



2 The **perimeter** of this square is 40 ft. How long is one side?

- A 4 ft.
- B 10 ft.
- C 20 ft.
- D 40 ft.



3 The Smith family has an odd shaped pool. What is the **perimeter** around their pool?

- A 94 yards
- B 6 yd.
- C 2 yd.
- D 4 yd.

4 If one side of this square is 2 yards long, what is the **perimeter**?



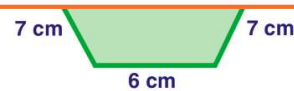
PREVIEW

Please [Sign In](#) or [Sign Up](#) to download the printable version of this worksheet

5 **B** 6 in.
C 12 in.
D 24 in.

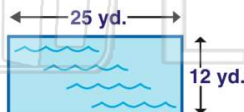


B 24 cm
C 28 cm
D 70 cm



9 If a rectangular pool is 25 yards long and 12 yards wide, what is the **perimeter** around the pool?

- A 74 yards
- B 50 yards
- C 24 yards
- D 12 yards



10 Mr. Tomato needs a fence for his garden. If his rectangular garden is 15 feet long and 10 feet wide, how long should his fence be?

- A 50 ft.
- B 15 ft.
- C 10 ft.
- D 150 ft.






Name _____ Class _____ Date _____

1 The **perimeter** of this square is 36 cm. What is the length of one side?
 _____cm


A 4 cm
B 8 cm
C 9 cm
D 36 cm



(C)

2 The **perimeter** of this square is 40 ft. How long is one side?

A 4 ft.
B 10 ft.
C 20 ft.
D 40 ft.




_____ft.

(B)


3 The Smith family has an odd shaped pool. What is the **perimeter** around their pool?

A 94 yards



(C)

4 If one side of this square is 2 yards long, what is the **perimeter**?



(C)



PREVIEW

Please [Sign In](#) or [Sign Up](#) to download the printable version of this worksheet

7


B 6 in.
C 12 in.
D 24 in.



5 in.

(A)

B 24 cm
C 28 cm
D 70 cm

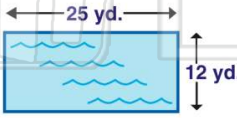


7 cm 7 cm
6 cm

(A)

9 If a rectangular pool is 25 yards long and 12 yards wide, what is the **perimeter** around the pool?

A 74 yards
B 50 yards
C 24 yards
D 12 yards




25 yd. 12 yd.

(A)

10 Mr. Tomato needs a fence for his garden. If his rectangular garden is 15 feet long and 10 feet wide, how long should his fence be?

A 50 ft.
B 15 ft.
C 10 ft.
D 150 ft.



15 ft. 10 ft.

(A)