

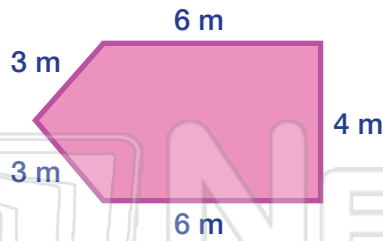


Perimeter

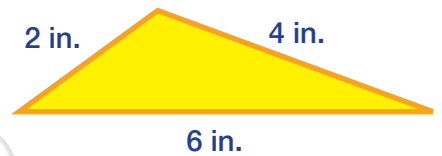
Math

Name _____ Class _____ Date _____

1 What is the **perimeter** of this **pentagon**?



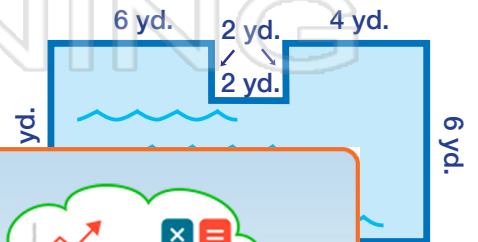
6 What is the **perimeter** of this **triangle**?



2 The principal wants to put a new fence around the school playground. How many **feet of fencing** will the principal need?

40 ft

7 The Smith family has an odd shaped pool. What is the **perimeter** around their pool?



PREVIEW

Please [Sign In](#) or [Sign Up](#) to download the printable version of this worksheet

3 F
th

arden.
long
his

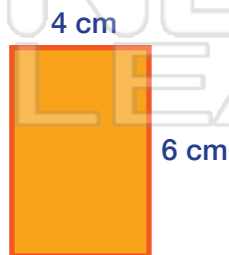
10 ft.

4 v

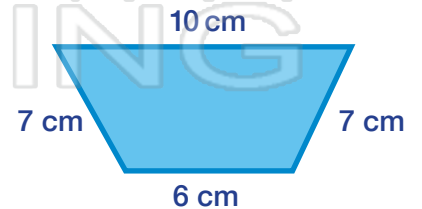
square is equal to 16 cm,
how long is each of the
sides?

? cm

5 Find the **perimeter** of this **rectangle**.



10 Find the **perimeter** of this **trapezoid**.



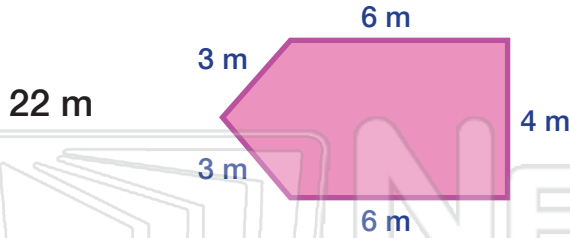


Perimeter - Answer Key

Math

Name _____ Class _____ Date _____

1 What is the **perimeter** of this **pentagon**?



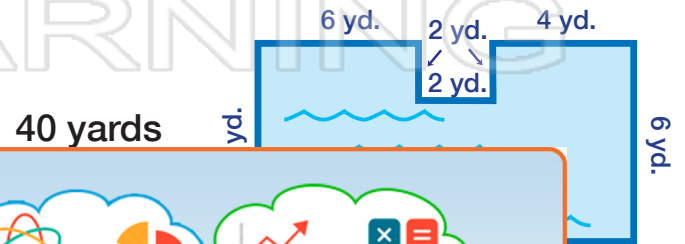
6 What is the **perimeter** of this **triangle**?



2 The principal wants to put a new fence around the school playground. How many **feet of fencing** will the principal need?

40 ft

7 The Smith family has an odd shaped pool. What is the **perimeter** around their pool?



PREVIEW

Please [Sign In](#) or [Sign Up](#) to download the printable version of this worksheet

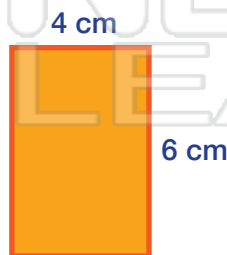
3 F
th

3

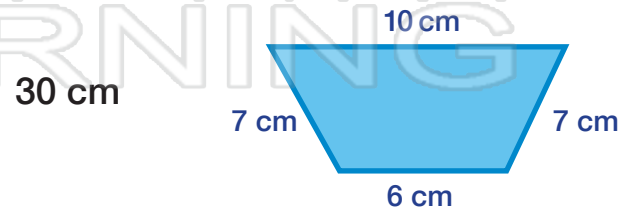
4 V

5 Find the **perimeter** of this **rectangle**.

20 cm



10 Find the **perimeter** of this **trapezoid**.



square is equal to 16 cm, how long is each of the sides?

$$16 \text{ cm} \div 4 = 4 \text{ cm}$$

? cm