




Name _____ Class _____ Date _____

Here are some angles. Angles are like corners.



Circle the angles on the shapes. Count how many angles and sides each shape has.

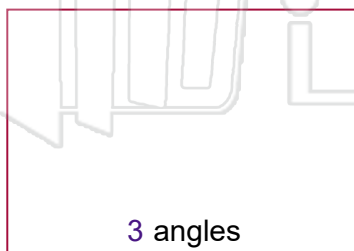


	Name of shape	Angles	Sides



PREVIEW

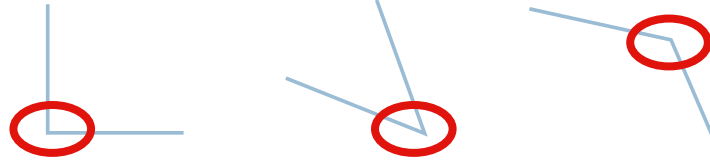
Please [Sign In](#) or [Sign Up](#) to download the printable version of this worksheet





ANSWER KEY

Here are some angles. Angles are like corners.



Circle the angles on the shapes. Count how many angles and sides each shape has.

	Name of shape	Angles	Sides
	Triangle	3	3
	Diamond	4	4
	Hexagon	6	6
	Square	4	4



PREVIEW

Please [Sign In](#) or [Sign Up](#) to download the printable version of this worksheet

O S U

No angles

1 angle

2 angles

3 angles

4 angles

5 angles