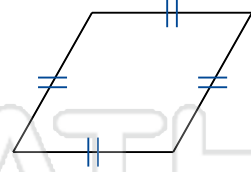
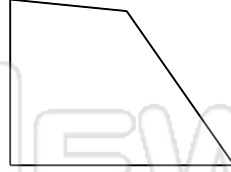
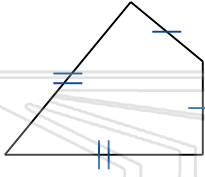




# Identify the Type For Each Quadrilateral

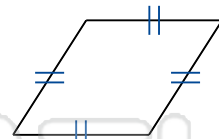
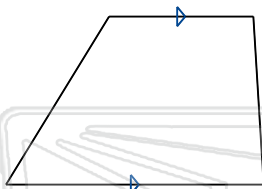
Math

Name \_\_\_\_\_ Class \_\_\_\_\_ Date \_\_\_\_\_



## PREVIEW

Please [Sign In](#) or [Sign Up](#) to download the printable version of this worksheet

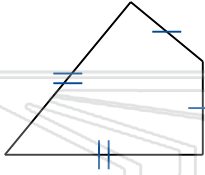




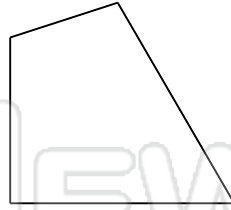
# Identify the Type For Each Quadrilateral

Math

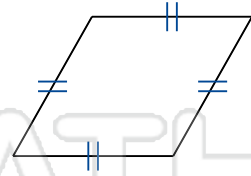
Name \_\_\_\_\_ Class \_\_\_\_\_ Date \_\_\_\_\_



Kite



Quadrilateral

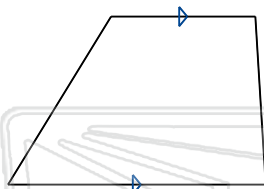


Rhombus



## PREVIEW

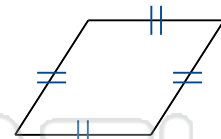
Please [Sign In](#) or [Sign Up](#) to download the printable version of this worksheet



Trapezoid



Kite



Rhombus