



Name _____ Class _____ Date _____

1

Serena writes the following number pattern:

50, 100, 150, 200,

How will Serena find the **next** number?

- A add 100
- B add 50
- C subtract 100
- D add 200

2

There are 100 paper clips in a box. How many clips are in 6 boxes?



- A 60
- B 6000
- C 500
- D 600

3

What is the **missing** number?

23 25 ? 29 31

A 27

4

There are 50 cups in a bag. How many bags do you need to get 400 cups?

5



PREVIEW

Please [Sign In](#) or [Sign Up](#) to download the printable version of this worksheet

7

- A 70
- B 80
- C 82
- D 85

- A 60
- B 67
- C 70
- D 72

9

There are 100 sheets of paper in a notebook. How many sheets are in 8 notebooks?



- A 80
- B 800
- C 8000
- D 108

10


What number is **missing** in this series?

16 26 36 46 ?

- A 50
- B 52
- C 56
- D 60



Name _____ Class _____ Date _____


1 Serena writes the following number pattern:
50, 100, 150, 200, 

How will Serena find the **next** number?

A add 100 **C** subtract 100
B add 50 **D** add 200

2 There are **100 paper clips** in a box. How many clips are in **6 boxes**?

A 60
B 6000
C 500
D 600



3 What is the **missing** number?
23 25 ? 29 31

A 27

4 There are **50 cups** in a bag. How many bags do you need to get **400 cups**?

A 5
B 8
C 10
D 15



PREVIEW

Please [Sign In](#) or [Sign Up](#) to download the printable version of this worksheet


7

A 70
B 80
C 82
D 85

A 60
B 67
C 70
D 72

9 There are **100 sheets** of paper in a notebook. How many sheets are in **8 notebooks**?

A 80
B 800
C 8000
D 108



10 What number is **missing** in this series?
16 26 36 46 ?

A 50 **C** 56
B 52 **D** 60