



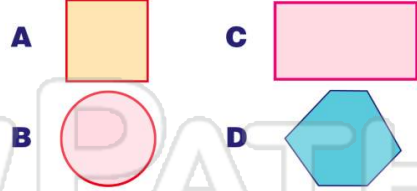
Name _____ Class _____ Date _____

1 How many lines of symmetry does the letter **X** have?

- A 0
- B 1
- C 2
- D 3



2 Which shape does not have a line of symmetry?



3 Which **triangle** has a line of symmetry?



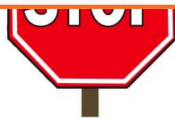
4 All squares are symmetrical. True or false?



PREVIEW

Please [Sign In](#) or [Sign Up](#) to download the printable version of this worksheet

5
A true
B false

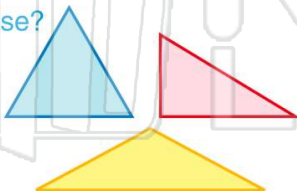


B 2
C 3
D 4



9 All triangles are symmetrical. True or false?

- A true
- B false



10 A **rectangle** has _____ lines of symmetry.

- A 1
- B 2
- C 3
- D 4





Name _____ Class _____ Date _____

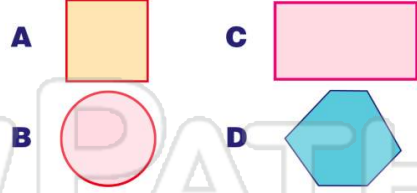
1 How many lines of symmetry does the letter **X** have?

- A 0
- B 1
- C 2
- D 3



(C)

2 Which shape does not have a line of symmetry?



(D)

3 Which **triangle** has a line of symmetry?



(C)

4 All squares are symmetrical. True or false?



A true

(A)

5



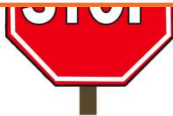
(D)

PREVIEW

Please [Sign In](#) or [Sign Up](#) to download the printable version of this worksheet

7

- A true
- B false



- B 2
- C 3
- D 4

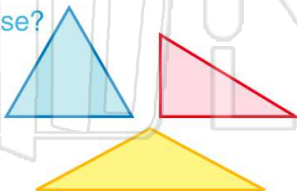


(D)

9 All triangles are symmetrical.

True or false?

- A true
- B false



(B)

10 A **rectangle** has _____ lines of symmetry.

- A 1
- B 2
- C 3
- D 4



(B)