

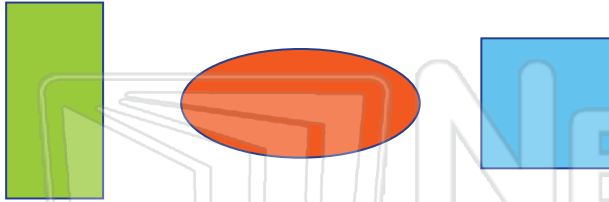


Congruence & Symmetry

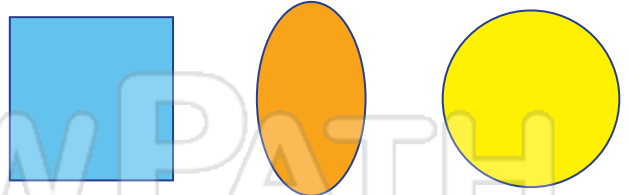
Math

Name _____ Class _____ Date _____

1 Which is **congruent** with  ?
Circle it.



6 Which is **congruent** with  ?
Circle it.



2 Which is **congruent** with  ?
Circle it.

7 Which letter **does not** have a **line of symmetry**? Cross it out.

3 H
s
h
it



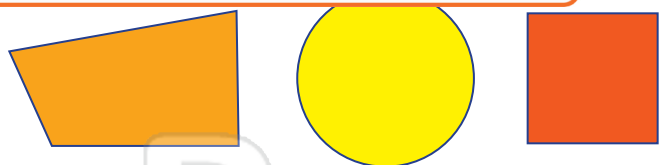
PREVIEW

Please [Sign In](#) or [Sign Up](#) to download the printable version of this worksheet

4 H
s



10 Circle the **two congruent** shapes.



5 **Congruent shapes** are the **same size** and _____.



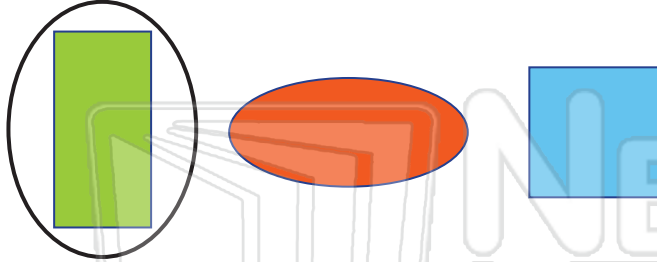


Congruence & Symmetry - Answer Key

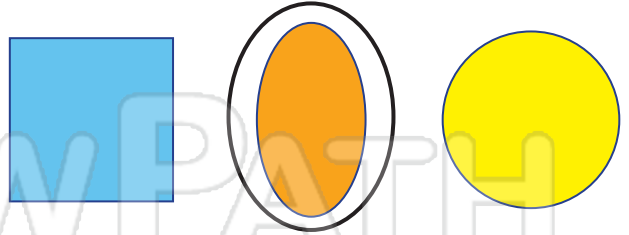
Math

Name _____ Class _____ Date _____

1 Which is **congruent** with  ?
Circle it.



6 Which is **congruent** with  ?
Circle it.



2 Which is **congruent** with  ?
Circle it.



7 Which letter **does not** have a **line of symmetry**? Cross it out.

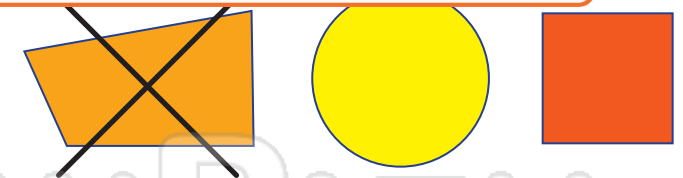
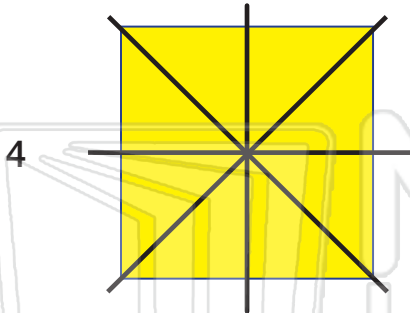
3 H
s
h
it



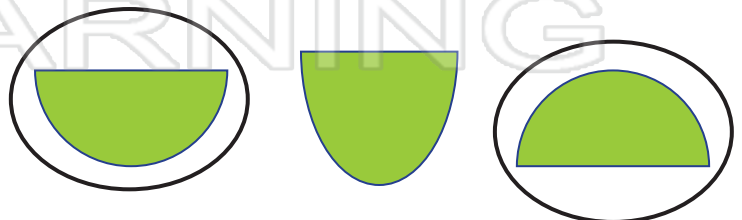
PREVIEW

Please [Sign In](#) or [Sign Up](#) to download the printable version of this worksheet

4 H
s



10 Circle the **two congruent** shapes.



5 **Congruent shapes** are the **same size** and **shape**.