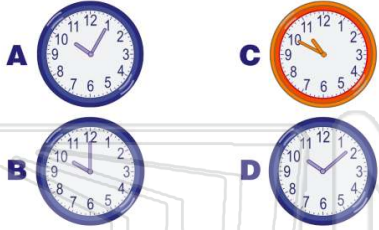




Name _____ Class _____ Date _____

1 Which clock shows **10:08**?



2 What time is it?

- A 6:58
- B 7:00
- C 11:33
- D 11:35



3 Which shows **1:24**?



4 Choose the clock showing **2:45**.



5



PREVIEW

Please [Sign In](#) or [Sign Up](#) to download the printable version of this worksheet

7

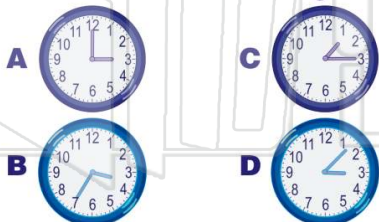
- C 4:13
- D 4:20



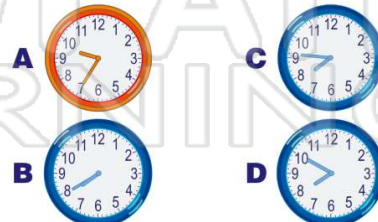
- C 5:28
- D 8:30



9 Choose the clock showing **3:07**.



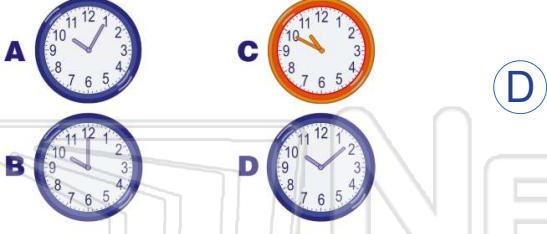
10 Which clock shows **7:46**?





Name _____ Class _____ Date _____

1 Which clock shows **10:08**?



2 What time is it?

- A 6:58
- B 7:00
- C 11:33
- D 11:35



3 Which shows **1:24**?



4 Choose the clock showing **2:45**.



5



PREVIEW

Please [Sign In](#) or [Sign Up](#) to download the printable version of this worksheet

7


- C 4:13
- D 4:20



- C 5:28
- D 8:30



9 Choose the clock showing **3:07**.



10 Which clock shows **7:46**?

