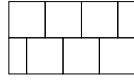


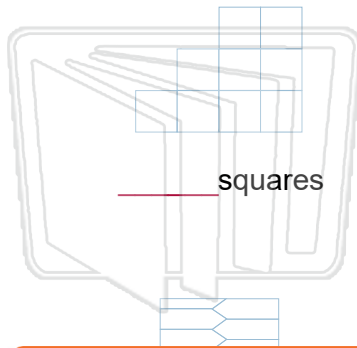


Name _____ Class _____ Date _____


What is the area of each shape?
Don't forget to count the halves!



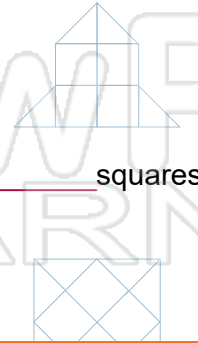
area = 7 squares



_____ squares



_____ squares



_____ squares

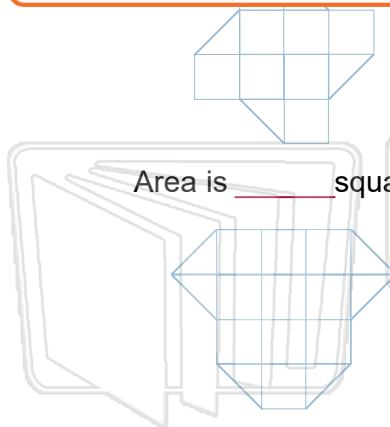


_____ rectangles

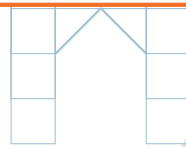


PREVIEW

Please [Sign In](#) or [Sign Up](#) to download the printable version of this worksheet



Area is _____ squares



Area is _____

Area is _____

Area is _____

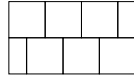


Color the biggest area green and the smallest area red.

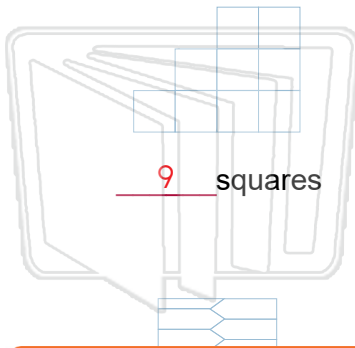


ANSWER KEY

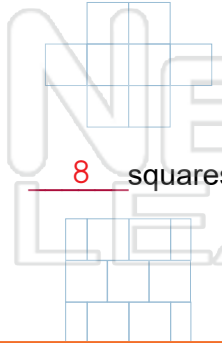
What is the area of each shape?
Don't forget to count the halves!



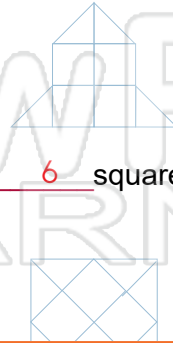
area = 7 squares



9 squares



8 squares



6 squares

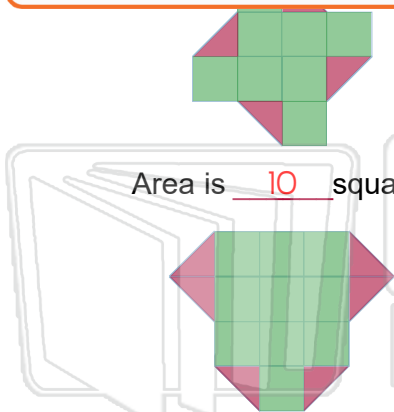


12 rectangles

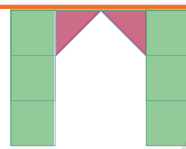


PREVIEW

Please [Sign In](#) or [Sign Up](#) to download the printable version of this worksheet



Area is 10 squares



Area is 11

Area is 13

Area is 12



Color the biggest area green and the smallest area red.