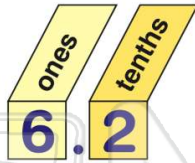





Name _____ Class _____ Date _____

1 How is **6.2** best written?

- A sixty two
- B six and two ones
- C six and two tenths
- D six and two tens



2 **3.2** is three and two tens.




True or false?

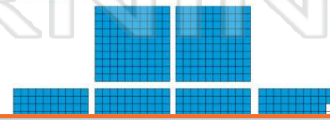
- A true
- B false

3 **1.78** is _____.

- A one and seventy-eight



4 **5.92** is five and ninety-two hundredths.



5



PREVIEW

Please [Sign In](#) or [Sign Up](#) to download the printable version of this worksheet

7

- B false

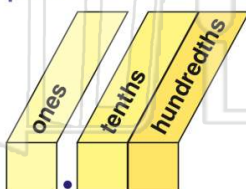


- B tenths
- C hundredths
- D tens



9 Which **underlined** digit is in the **hundredths** place?

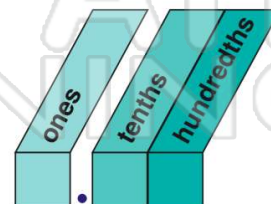
- A 3.572
- B 3.572
- C 3.572
- D 3.572



10 What **digit** is in the **tenths** place?

12.65

- A 1
- B 2
- C 6
- D 5

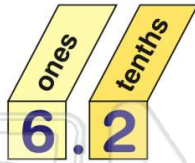




Name _____ Class _____ Date _____


1 How is **6.2** best written?

- A sixty two
- B six and two ones
- C six and two tenths
- D six and two tens



C

2 **3.2** is three and two tens.




B

True or false?

- A true
- B false

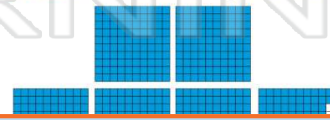
3 **1.78** is _____.

- A one and seventy-eight



D

4 **5.92** is five and ninety-two hundredths.



A

5



C

PREVIEW

Please [Sign In](#) or [Sign Up](#) to download the printable version of this worksheet

7

- B false



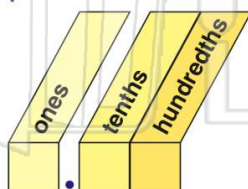
- B tenths
- C hundredths
- D tens



B

9 Which **underlined** digit is in the **hundredths** place?

- A 3.572
- B 3.572
- C 3.572
- D 3.572

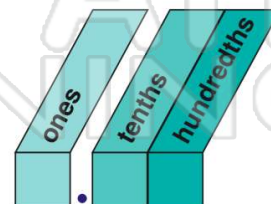


D

10 What **digit** is in the **tenths** place?

12.65

- A 1
- B 2
- C 6
- D 5



C