



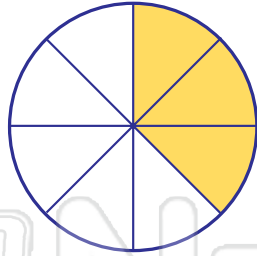
Fractions - Answer Key

Math

Name _____ Class _____ Date _____

1 What **fraction** of the circle is **shaded**?

$$\frac{3}{8}$$



6 Circle the **equivalent** fraction of $\frac{1}{2}$.

$$\frac{2}{6}$$

$$\frac{3}{6}$$

$$\frac{5}{6}$$

2 Rewrite the following fractions in order from **greatest to least**:


$$\frac{1}{3}$$

$$\frac{1}{2}$$

$$\frac{1}{4}$$

7 What **fraction** of the birds are **yellow**?

$$\frac{5}{9}$$



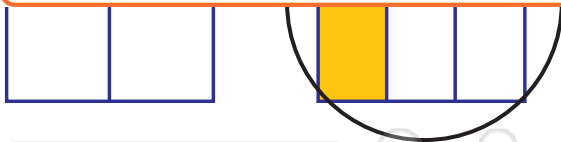
3



PREVIEW

Please [Sign In](#) or [Sign Up](#) to download the printable version of this worksheet

4



$$\frac{2}{3}$$

$$\frac{1}{2}$$

$$\frac{1}{4}$$

5 There are **3 soccer balls** and **2 footballs**. What **fraction** of the balls are **soccer balls**?

$$\frac{3}{5}$$



10 Fill in the symbol; <, >, =



>

