




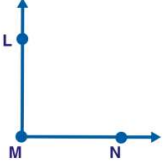
Name \_\_\_\_\_ Class \_\_\_\_\_ Date \_\_\_\_\_





1  $\angle DEF$  contains a  **DF**

True or false?


**A** true  
**B** false

2 Name a **ray** that is contained in the following angle.




**A**  **LN**  
**B**  **M**  
**C**  **L**  
**D**  **ML**

3  $\angle WXY$  contains a **point X**.



**A** true

4 Name the **angle**.



**A**  $\angle STR$   
**B**  $\angle TRS$   
**C**  $\angle RST$




**PREVIEW**

Please [Sign In](#) or [Sign Up](#) to download the printable version of this worksheet

7

**D** straight

9 This is showing a(n)  **angle**.


**A** right  
**B** straight  
**C** obtuse  
**D** acute

**D** obtuse

10 An **acute angle** measures **more than 90 degrees**.


True or false?

**A** true  
**B** false

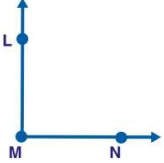









Name \_\_\_\_\_ Class \_\_\_\_\_ Date \_\_\_\_\_

- 1  $\angle DEF$  contains a  **DF**  
True or false?  
A true  
B false


(B)

- 2 Name a **ray** that is contained in the following angle.  

- A  LN  
B  MN  
C  LN  
D  ML

(D)

- 3  $\angle WXY$  contains a **point X**.  
  
True or false?  
A true

(A)

- 4 Name the **angle**.  

- A  $\angle STR$   
B  $\angle TRS$   
C  $\angle RST$


(C)




(A)

## PREVIEW


Please [Sign In](#) or [Sign Up](#) to download the printable version of this worksheet

- 7   
A acute  
B straight  
C obtuse  
D obtuse

(C)

- 9 This is showing a(n)  **angle**.  
A right  
B straight  
C obtuse  
D acute

(D)

- 10 An **acute angle** measures **more than 90 degrees**.  
True or false?  
A true  
B false  


(B)