



Lines & Angles

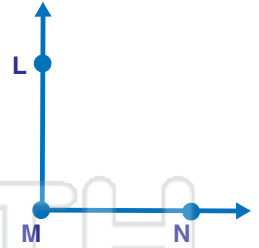
Math

Name _____ Class _____ Date _____

1 Which set of lines is **intersecting**?
Circle them.



6 Name a **ray** that is contained in the following angle.



2 Which set of lines is **perpendicular**?
Circle them.



7 Circle the **name** of the **angle**.



3




PREVIEW

Please [Sign In](#) or [Sign Up](#) to download the printable version of this worksheet

4

5 All **intersecting lines** form **90-degree angles**. True or false?
Write your answer.



10 A **right angle** measures _____ degrees.



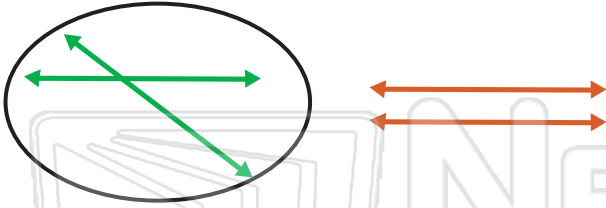


Lines & Angles - Answer Key

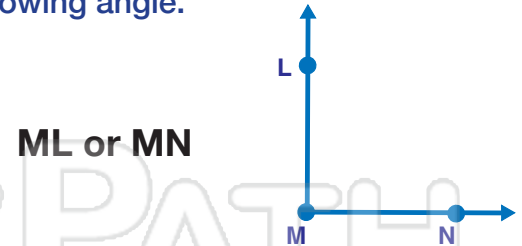
Math

Name _____ Class _____ Date _____

- 1 Which set of lines is **intersecting**?
Circle them.



- 6 Name a **ray** that is contained in the following angle.



- 2 Which set of lines is **perpendicular**?
Circle them.



- 7 Circle the **name** of the **angle**.



3



PREVIEW

Please [Sign In](#) or [Sign Up](#) to download
the printable version of this worksheet

4



- 10 A **right angle** measures _____ **90** degrees.

- 5 **All intersecting lines form 90-degree angles.** True or false?
Write your answer.

false



acute