

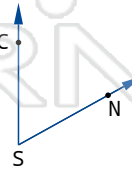
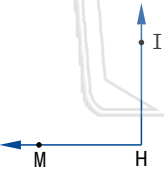
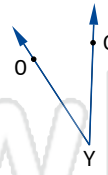
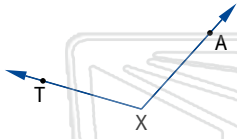


# Naming Angles

Math

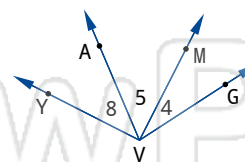
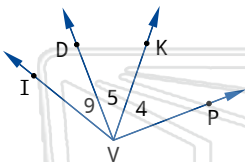

Name \_\_\_\_\_ Class \_\_\_\_\_ Date \_\_\_\_\_

Name the vertex and sides of each angle.



## PREVIEW

Please [Sign In](#) or [Sign Up](#) to download the printable version of this worksheet



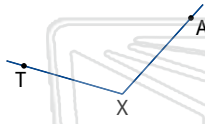


# Naming Angles - Answer Key

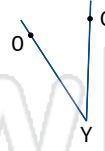
Math

Name \_\_\_\_\_ Class \_\_\_\_\_ Date \_\_\_\_\_

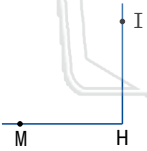
Name the vertex and sides of each angle.



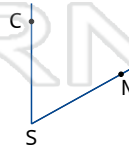
X,  $\overrightarrow{XA}$ ,  $\overrightarrow{XT}$



Y,  $\overrightarrow{YG}$ ,  $\overrightarrow{YO}$



H,  $\overrightarrow{HI}$ ,  $\overrightarrow{HM}$

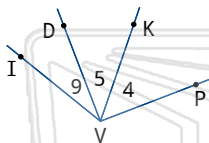
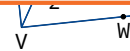


S,  $\overrightarrow{SN}$ ,  $\overrightarrow{SC}$

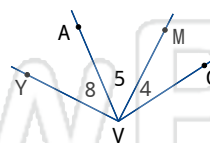


## PREVIEW

Please [Sign In](#) or [Sign Up](#) to download the printable version of this worksheet



$\angle 4$ ,  $\angle 5$ ,  $\angle 9$   
 $\angle PVI$ ,  $\angle PVD$ ,  $\angle KVI$



$\angle 4$ ,  $\angle 5$ ,  $\angle 8$   
 $\angle GVI$ ,  $\angle GVA$ ,  $\angle MVI$