



Name _____ Class _____ Date _____

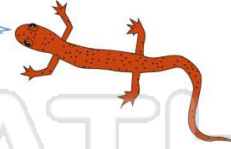
1 This week it snowed **2 feet** on Monday, **3 feet** on Wednesday, and **7 feet** on Saturday. What is the **mean** of snowfall of the entire week?

- A 3 feet
- B 4 feet
- C 5 feet
- D 6 feet



2 Find the **average** of **44, 49, and 51**.

- A 46
- B 49
- C 50
- D 48



3 Last week at the pool, Joe jumped off the diving board **21 times**, Tim jumped off **25 times**, and Fred jumped off **29 times**. What was the **average** number of times they jumped off the diving

4 The mean is found by dividing the sum of a set of numbers by the total number of values given. Find the **mean** of the **three numbers** below.

22 | 44 | 55



PREVIEW

Please [Sign In](#) or [Sign Up](#) to download the printable version of this worksheet


7 **14 | 19 | 21**

- A \$80
- B \$70
- C \$60
- D \$50

- A 20
- B 18
- C 15
- D 17

9 The girls found out their test scores in Math today. Rhianna got a **94%**, Jen got an **85%**, and Lisa got an **82%**. What is the **mean** of their test scores?

- A 87%
- B 89%
- C 92%
- D 90%



10 The average is found by dividing the sum of a set of numbers by the total number of values given.

The **average** of **63, 40, and 29** is _____.

- A 66
- B 55
- C 33
- D 44



Name _____ Class _____ Date _____

1 This week it snowed **2 feet** on Monday, **3 feet** on Wednesday, and **7 feet** on Saturday. What is the **mean** of snowfall of the entire week?

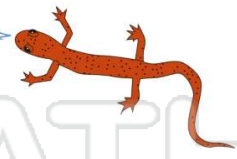
- A 3 feet
- B 4 feet
- C 5 feet
- D 6 feet



(B)

2 Find the **average** of **44, 49, and 51.**

- A 46
- B 49
- C 50
- D 48



(D)

3 Last week at the pool, Joe jumped off the diving board **21 times**, Tim jumped off **25 times**, and Fred jumped off **29 times**. What was the **average** number of times they jumped off the diving

(C)

4 The mean is found by dividing the sum of a set of numbers by the total number of values given. Find the **mean** of the **three numbers** below.

22, 44, 55

(A)

5



(D)

PREVIEW

Please [Sign In](#) or [Sign Up](#) to download the printable version of this worksheet

7

- A \$80
- B \$70
- C \$60
- D \$50


14, 19, 21

- A 20
- B 18
- C 15
- D 17

(B)

9 The girls found out their test scores in Math today. Rhianna got a **94%**, Jen got an **85%**, and Lisa got an **82%**. What is the **mean** of their test scores?

- A 87%
- B 89%
- C 92%
- D 90%



(A)

10 The average is found by dividing the sum of a set of numbers by the total number of values given.

The **average** of **63, 40, and 29** is _____.

- A 66
- B 55
- C 33
- D 44

(D)