



Units of Measurement

Math

Name _____ Class _____ Date _____

- 1 Which **metric unit** would you use to measure the **length** of your **pencil**? Circle it.



centimeter

liter

pint

meter

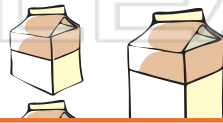
yard

pound

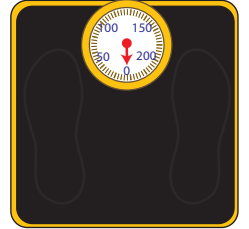
pint

ton

- 2 There are **2 pints** in **1 quart**. How many **pints** are there in **8 quarts**?



- 6 If you wanted to find out **how much you weigh**, what **customary unit** of measurement would you use? Circle it.



- 7 Which unit is **not used to measure length**? Cross it out.

- 3 If **9** _____ **1** _____



ons

PREVIEW

Please [Sign In](#) or [Sign Up](#) to download the printable version of this worksheet

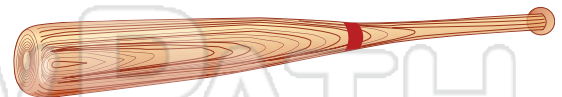
- 4 C _____ o _____ t _____

yard

pint



- 9 A **baseball bat** is about **3** _____ long.



- 5 Sally ran **2 kilometers**. How many **meters** did she run?
1 km = 1,000 m



- 10 If there are **3 feet** in **1 yard**, how many feet are there in **3 yards**?





Units of Measurement - Answer Key

Math

Name _____ Class _____ Date _____

- 1 Which **metric unit** would you use to measure the **length** of your **pencil**? Circle it.



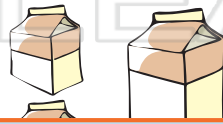
centimeter

liter

pint

meter

- 2 There are 2 pints in 1 quart. How many pints are there in 8 quarts?



- 3 If 9
1



PREVIEW

Please [Sign In](#) or [Sign Up](#) to download the printable version of this worksheet

- 4 C
o
t

yard

pint



- 5 Sally ran 2 kilometers. How many meters did she run?

1 km = 1,000 m

2,000 meters



- 6 If you wanted to find out how much you weigh, what **customary unit** of measurement would you use? Circle it.



yard

pound

pint

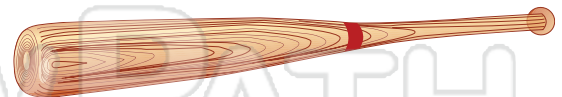
ton

- 7 Which unit is not used to measure length? Cross it out

- 3 If 9
1

- 4 C
o
t

- 9 A baseball bat is about 3 _____ feet long.



- 10 If there are 3 feet in 1 yard, how many feet are there in 3 yards?



9 feet