



Name _____ Class _____ Date _____

1 Mack bought a pound of chocolate for \$3.60 and a dozen roses for \$24.35. How much did Mack spend in all?

- A \$21.15
- B \$24.65
- C \$27.95
- D \$29.12

\$24.35
+ \$3.60



2 The baseball glove you are buying costs \$24.59. You give the cashier \$25.00. What change should you receive from the cashier?

- A \$0.41
- B \$1.41
- C \$0.51
- D \$0.61

\$25.00
- \$24.59



3 Becky wants to buy a basketball that costs \$6.35. She gives the cashier \$10.00. What change should Becky receive from the cashier?

4 Kelly bought a puzzle for \$4.35 and a calendar for \$10.50. How much did Kelly spend in all?

- A \$6.20
- B \$10.50



PREVIEW

Please [Sign In](#) or [Sign Up](#) to download the printable version of this worksheet

- B \$0.25
- C \$0.75
- D \$1.75



- B \$51.84
- C \$53.26
- D \$54.19



9 Danielle bought a DVD for \$15.99 and a DVD player for \$84.95. How much did Danielle spend in all?

- A \$98.15
- B \$99.48
- C \$100.94
- D \$103.39

\$15.99
+ \$84.95



10 The cashier tells you that you owe her \$4.56. You give her \$10.00. What change should you receive back?

- A \$5.44
- B \$5.34
- C \$5.24
- D \$5.14

\$10.00
- \$4.56






Name _____ Class _____ Date _____

1 Mack bought a pound of chocolate for \$3.60 and a dozen roses for \$24.35. How much did Mack spend in all?

A \$21.15
 B \$24.65
 C \$27.95
 D \$29.12

\$24.35
+ \$3.60




(C)

2 The baseball glove you are buying costs \$24.59. You give the cashier \$25.00. What change should you receive from the cashier?


A \$0.41
 B \$1.41
 C \$0.51
 D \$0.61

\$25.00
- \$24.59



(A)


3 Becky wants to buy a basketball that costs \$6.35. She gives the cashier \$10.00. What change should Becky receive from the cashier?



(B)

4 Kelly bought a puzzle for \$4.35 and a calendar for \$10.50. How much did Kelly spend in all?

A \$6.20
 B \$10.50



(D)

5



PREVIEW

Please [Sign In](#) or [Sign Up](#) to download the printable version of this worksheet

(C)

7

B \$0.25
 C \$0.75
 D \$1.75



(A)

B \$51.84
 C \$53.26
 D \$54.19



(A)

9 Danielle bought a DVD for \$15.99 and a DVD player for \$84.95. How much did Danielle spend in all?

A \$98.15
 B \$99.48
 C \$100.94
 D \$103.39

\$15.99
+ \$84.95




(C)

10 The cashier tells you that you owe her \$4.56. You give her \$10.00. What change should you receive back?

A \$5.44
 B \$5.34
 C \$5.24
 D \$5.14

\$10.00
- \$4.56



(A)