





Name \_\_\_\_\_ Class \_\_\_\_\_ Date \_\_\_\_\_

- 1 Charlene had **1 hour** to complete all her chores. She spent **15 minutes** dusting, **12 minutes** doing the dishes, and **20 minutes** vacuuming. How many minutes does she have left to clean her room?
- 
- A** 27 minutes      **C** 33 minutes  
**B** 47 minutes      **D** 13 minutes

- 2 Thirty-two fans came to the concert early. Twenty-two more fans arrived when the concert began. However, 14 fans left when it started raining. How many fans were at the concert after it started raining?
- 
- A** 40 fans      **C** 54 fans  
**B** 36 fans      **D** 10 fans


- 3 Shelby collected shells during her vacation. She collected **17** on Friday, **15** on Saturday, and **21** on Sunday. When she was packing her suitcase, **5** shells broke so she threw them away.


- 4 Peyton is buying a puzzle for **\$2.75**, binoculars for **\$9.95**, and glow-in-the-dark stickers for **\$1.75**. He gives the cashier a **\$20.00** bill. How much change will Peyton get back?



## PREVIEW

Please [Sign In](#) or [Sign Up](#) to download the printable version of this worksheet

- 7
- A** \$10.50  
**B** \$10.95  
**C** \$21.95  
**D** \$11.95
- 

- many minutes does Ryan have left in study hall?
- 
- A** 26 minutes      **C** 34 minutes  
**B** 19 minutes      **D** 35 minutes

- 9 Rajah was in line to buy a game that cost **\$11.95**, a pen that cost **\$2.75**, and a crossword book that cost **\$2.35**. He gives the cashier **\$20.00**. How much change will he receive back?
- A** \$3.95      **C** \$17.05  
**B** \$5.95      **D** \$2.95

- 10 Michaela and Mia have **1 hour** to play outside. They spent **14 minutes** roller skating, **17 minutes** riding bikes, and **11 minutes** playing hopscotch. How many more minutes can the girls play?
- 
- A** 35 minutes      **C** 22 minutes  
**B** 18 minutes      **D** 8 minutes



Name \_\_\_\_\_ Class \_\_\_\_\_ Date \_\_\_\_\_

1 Charlene had **1 hour** to complete all her chores. She spent **15 minutes** dusting, **12 minutes** doing the dishes, and **20 minutes** vacuuming. How many minutes does she have left to clean her room?



- A 27 minutes
- B 47 minutes
- C 33 minutes
- D 13 minutes

(D)

2 Thirty-two fans came to the concert early. Twenty-two more fans arrived when the concert began. However, 14 fans left when it started raining. How many fans were at the concert after it started raining?



- A 40 fans
- B 36 fans
- C 54 fans
- D 10 fans

(A)

3 Shelby collected shells during her vacation. She collected **17** on Friday, **15** on Saturday, and **21** on Sunday. When she was packing her suitcase, **5** shells broke so she threw them away.

(C)

4 Peyton is buying a puzzle for **\$2.75**, binoculars for **\$9.95**, and glow-in-the-dark stickers for **\$1.75**. He gives the cashier a **\$20.00** bill. How much change will Peyton get back?

(D)

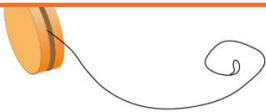


## PREVIEW

Please [Sign In](#) or [Sign Up](#) to download the printable version of this worksheet

5

- A \$10.50
- B \$10.95
- C \$21.95
- D \$11.95



6 many minutes does Ryan have left in study hall?

- A 26 minutes
- B 19 minutes
- C 34 minutes
- D 35 minutes



(A)

9 Rajah was in line to buy a game that cost **\$11.95**, a pen that cost **\$2.75**, and a crossword book that cost **\$2.35**. He gives the cashier **\$20.00**. How much change will he receive back?

- A \$3.95
- B \$5.95
- C \$17.05
- D \$2.95

(D)

10 Michaela and Mia have **1 hour** to play outside. They spent **14 minutes** roller skating, **17 minutes** riding bikes, and **11 minutes** playing hopscotch. How many more minutes can the girls play?



- A 35 minutes
- B 18 minutes
- C 22 minutes
- D 8 minutes

(B)