



Name \_\_\_\_\_ Class \_\_\_\_\_ Date \_\_\_\_\_

1 If 100 people entered the store but only 15 people bought something, what percentage of the shoppers bought something in the store?

- A 75%
- B 85%
- C 15%
- D 5%

$$\frac{15}{100} = \square$$



2 If 100 people came to the party and 55 stayed until midnight, what percentage of the party guests went home before midnight?

- A 15%
- B 55%
- C 45%
- D 54%

$$\frac{100\% - 55\%}{100} = \square$$



3 There were 100 questions on your Multiplication test. You answered 91 of them correctly. What score did you receive on your test? 91



4  $\frac{86}{100} = \square$

- A 18%

"Fractions are fun!"



5



## PREVIEW

Please [Sign In](#) or [Sign Up](#) to download the printable version of this worksheet

7

coaster ride?

$$\frac{80}{100} = \square$$

- A 80%
- B 20%
- C 65%
- D 85%



- A 17%
- B 41%
- C 49%
- D 100%

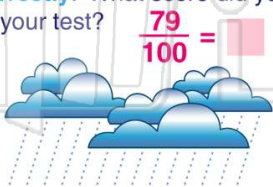
$$\frac{\square}{100} = \square$$



9

There were 100 questions on your Weather Facts Test. You answered 79 of them correctly. What score did you receive on your test?

- A 21%
- B 69%
- C 59%
- D 79%



10

$$\frac{77}{100} = \square$$

- A 66%
- B 77%
- C 33%
- D 177%





Name \_\_\_\_\_ Class \_\_\_\_\_ Date \_\_\_\_\_

1 If 100 people entered the store but only 15 people bought something, what percentage of the shoppers bought something in the store?


A 75%     $\frac{15}{100} =$    
 B 85%  
 C 15%  
 D 5%



(C)


2 If 100 people came to the party and 55 stayed until midnight, what percentage of the party guests went home before midnight?

A 15%    C 45%     $\frac{100\%}{-55\%}$   
 B 55%    D 54%



(C)

3 There were 100 questions on your Multiplication test. You answered 91 of them correctly. What score did you receive on your test? 91



(D)

4  $\frac{86}{100} =$

A 18%

"Fractions are fun!"



(D)




## PREVIEW

Please [Sign In](#) or [Sign Up](#) to download the printable version of this worksheet

6 coaster ride?  $\frac{80}{100} =$


A 80%    C 65%  
 B 20%    D 85%



(B)

7  $\frac{41}{100} =$


A 17%  
 B 41%  
 C 49%  
 D 100%



(B)

9 There were 100 questions on your Weather Facts Test. You answered 79 of them correctly. What score did you receive on your test?  $\frac{79}{100} =$


A 21%  
 B 69%  
 C 59%  
 D 79%



(D)

10  $\frac{77}{100} =$

A 66%  
 B 77%  
 C 33%  
 D 177%



(B)