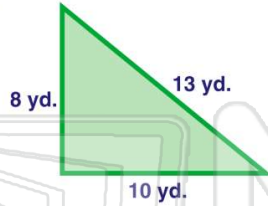




Name _____ Class _____ Date _____

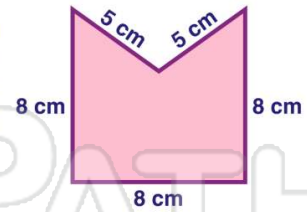
1 The **perimeter** of this triangle is _____.

- A 18 yd.
- B 23 yd.
- C 31 yd.
- D 12 yd.



2 What is the **perimeter** of this pentagon?


- A 20 cm
- B 24 cm
- C 32 cm
- D 34 cm



3 The **perimeter** of a square with the length of 8 mm is 16 mm.

True or false?

8 mm



4 Find the **perimeter** of this triangle.

- A 10 ft.
- B 7 ft.
- C 6 ft.



5

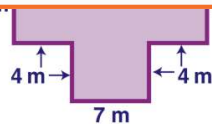


PREVIEW

Please [Sign In](#) or [Sign Up](#) to download the printable version of this worksheet

7

D 60 m

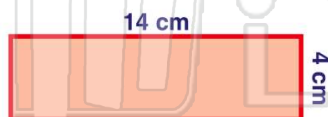


D 91 yd.



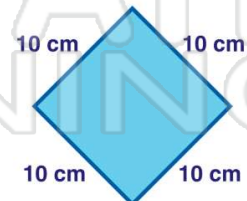
9 The **perimeter** of a rectangle 14 cm long and 4 cm wide is 36 cm.

- A true
- B false



10 The **perimeter** of this diamond is _____.

- A 10 cm
- B 40 cm
- C 20 cm
- D 30 cm

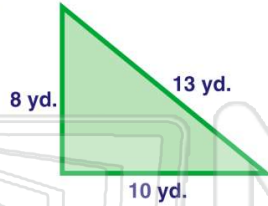




Name _____ Class _____ Date _____

1 The **perimeter** of this triangle is _____.

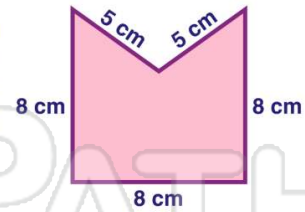
- A 18 yd.
- B 23 yd.
- C 31 yd.
- D 12 yd.



(C)

2 What is the **perimeter** of this pentagon?

- A 20 cm
- B 24 cm
- C 32 cm
- D 34 cm



(D)

3 The **perimeter** of a square with the length of 8 mm is 16 mm.

True or false?

8 mm



(B)

4 Find the **perimeter** of this triangle.

- A 10 ft.
- B 7 ft.
- C 6 ft.



(A)

5



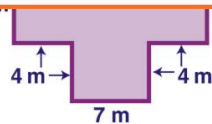
(A)

PREVIEW

Please [Sign In](#) or [Sign Up](#) to download the printable version of this worksheet

7

D 60 m



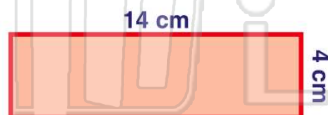
D 91 yd.



(C)

9 The **perimeter** of a rectangle 14 cm long and 4 cm wide is 36 cm.

- A true
- B false



(A)

10 The **perimeter** of this diamond is _____.

- A 10 cm
- B 40 cm
- C 20 cm
- D 30 cm



(B)