



Name _____ Class _____ Date _____

1 Round **23** to the nearest **tens**.



- A 23
- B 30
- C 20
- D 25

2 **67** rounded to the nearest **tens** is 60.



True or false?

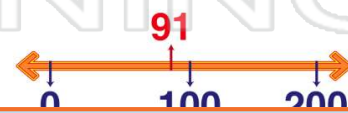
- A true
- B false

3 Round **177** to the nearest **tens**.



- A 170

4 Round **91** to the nearest **hundreds**.



5



PREVIEW

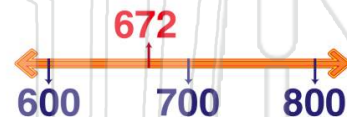
Please [Sign In](#) or [Sign Up](#) to download the printable version of this worksheet

7

- B 140
- C 100
- D 104

- B 144
- C 100
- D 150

9 Round **672** to the nearest **hundreds**.



- A 600
- B 670
- C 650
- D 700

10 **703** rounded to the nearest **hundreds** is **800**.



True or false?

- A true
- B false



Name _____ Class _____ Date _____

1 Round 23 to the nearest tens.



- A 23
- B 30
- C 20
- D 25

(C)

2 67 rounded to the nearest tens is 60.



True or false?

- A true
- B false

(B)

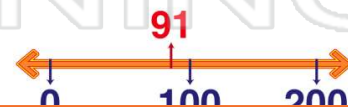
3 Round 177 to the nearest tens.



- A 170

(D)

4 Round 91 to the nearest hundreds.



(B)

5



(A)

PREVIEW

Please [Sign In](#) or [Sign Up](#) to download the printable version of this worksheet

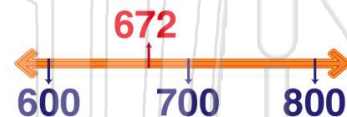
7

(A)

- B 140
- C 100
- D 104

- B 144
- C 100
- D 150

9 Round 672 to the nearest hundreds.



- A 600
- B 670
- C 650
- D 700

(D)

10 703 rounded to the nearest hundreds is 800.



True or false?

- A true
- B false

(B)