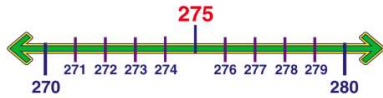




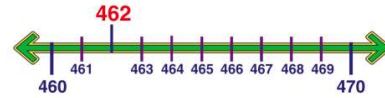
Name _____ Class _____ Date _____

1 Round **275** to the nearest **tens**.



- A 280
- B 270
- C 200
- D 300

2 Round **462** to the nearest **tens**.



- A 400
- B 500
- C 470
- D 460

3 Round **586** to the nearest **tens**.

- A 580
- B 600
- C 590

4 **855** rounded to the nearest **tens** is **860**.



5



PREVIEW

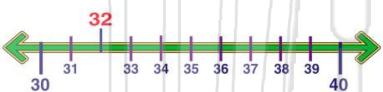
Please [Sign In](#) or [Sign Up](#) to download the printable version of this worksheet

7

- A 55
- B 60
- C 53
- D 50

- A 40
- B 45
- C 50
- D 60

9 **32** rounded to the nearest **tens** is **40**.



True or false?

- A true
- B false

10 **76** rounded to the nearest **tens** is **80**.



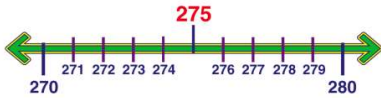
True or false?

- A true
- B false



Name _____ Class _____ Date _____

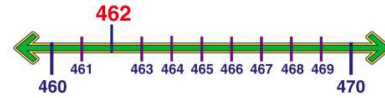
1 Round **275** to the nearest **tens**.



- A 280
- B 270
- C 200
- D 300

(A)

2 Round **462** to the nearest **tens**.



- A 400
- B 500
- C 470
- D 460

(D)

3 Round **586** to the nearest **tens**.

- A 580
- B 600
- C 590



(C)

4 **855** rounded to the nearest **tens** is **860**.



(A)

5



(B)

PREVIEW

Please [Sign In](#) or [Sign Up](#) to download the printable version of this worksheet

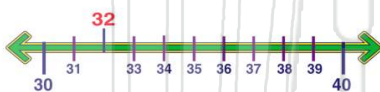
7

- A 55
- B 60
- C 53
- D 50

- A 40
- B 45
- C 50
- D 60

(C)

9 **32** rounded to the nearest **tens** is **40**.



True or false?

- A true
- B false

(B)

10 **76** rounded to the nearest **tens** is **80**.



True or false?

- A true
- B false

(A)