




Name _____ Class _____ Date _____

1 What **time** does this clock show?


- A 11:20
- B 12:10
- C 11:10
- D 12:05




2 Which clock below is showing **1:10**?



3 It is **3:15**. Harry has to go to see the doctor at **4:00**. How much time does Harry have before his appointment?



4 It takes Emily **10 minutes** to ride her bike to her grandmother's house. If she left at **5:15**, what time will she arrive?




PREVIEW

7 Please [Sign In](#) or [Sign Up](#) to download the printable version of this worksheet

A 7:15
B 6:45
C 5:45
D 6:55



A 10:15
B 10:00
C 10:25
D 10:20



9 What **time** does this clock show?

- A 7:45
- B 6:50
- C 7:50
- D 6:55



10 What **time** does this clock show?

- A 12:30
- B 6:00
- C 1:30
- D 1:00





Name _____ Class _____ Date _____

1 What **time** does this clock show?

- A 11:20
- B 12:10
- C 11:10
- D 12:05



(C)

2 Which clock below is showing **1:10**?



(B)

3 It is **3:15**. Harry has to go to see the doctor at **4:00**. How much time does Harry have before his appointment?



(B)

4 It takes Emily **10 minutes** to ride her bike to her grandmother's house. If she left at **5:15**, what time will she arrive?



(D)



PREVIEW

Please [Sign In](#) or [Sign Up](#) to download the printable version of this worksheet

7

- A 7:15
- B 6:45
- C 5:45
- D 6:55



- A 10:15
- B 10:00
- C 10:25
- D 10:20



9 What **time** does this clock show?

- A 7:45
- B 6:50
- C 7:50
- D 6:55



(C)

10 What **time** does this clock show?

- A 12:30
- B 6:00
- C 1:30
- D 1:00



(A)