




Name _____ Class _____ Date _____

1 Edith is reading a book that is 40 pages long. Each chapter has 5 pages. How many chapters are there?

- A 7
- B 8
- C 9
- D 35

$$40 \div 5 = \square$$



2 Mr. Wilson had \$12. He gave each of his children \$3. Which number sentence would you use to find out how many children Mr. Wilson has?

- A 12×3
- B $12 - 3$
- C $12 \div 3$
- D $12 \div 3$



3 It has rained 3 times a day for 14 days straight. How many times has it rained in two weeks?

- A 17



4 There are 14 birds in cages. Each cage holds 2 birds. How many cages are being used?



PREVIEW

Please [Sign In](#) or [Sign Up](#) to download the printable version of this worksheet

7

- B 12
- C 4
- D 24



- A 50×10
- B $50 \div 10$
- C $50 - 10$
- D $50 + 10$




9 Marsha washed 13 dishes, 5 nights in a row. How many dishes has Marsha washed?

- A 65
- B 18
- C 55
- D 19



10 Justin has 45 comic books, and they are all in boxes. Each box has 9 comic books inside. How many boxes are there?

- A 8
- B 9
- C 19
- D 5

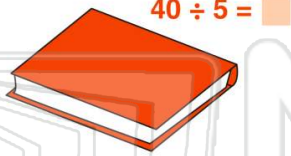




Name _____ Class _____ Date _____

1 Edith is reading a book that is 40 pages long. Each chapter has 5 pages. How many chapters are there?

- A 7
- B 8
- C 9
- D 35



(B)

2 Mr. Wilson had \$12. He gave each of his children \$3. Which number sentence would you use to find out how many children Mr. Wilson has?

- A 12×3
- B $12 - 3$
- C $12 + 3$
- D $12 \div 3$



(D)

3 It has rained 3 times a day for 14 days straight. How many times has it rained in two weeks?

- A 17



(C)

4 There are 14 birds in cages. Each cage holds 2 birds. How many cages are being used?



(A)

5



(D)

PREVIEW

Please [Sign In](#) or [Sign Up](#) to download the printable version of this worksheet

7

- B 12
- C 4
- D 24



- A 50×10
- B $50 \div 10$
- C $50 - 10$
- D $50 + 10$



(B)

9 Marsha washed 13 dishes, 5 nights in a row. How many dishes has Marsha washed?


- A 65
- B 18
- C 55
- D 19



(A)

10 Justin has 45 comic books, and they are all in boxes. Each box has 9 comic books inside. How many boxes are there?

- A 8
- B 9
- C 19
- D 5



(D)