



Name \_\_\_\_\_ Class \_\_\_\_\_ Date \_\_\_\_\_

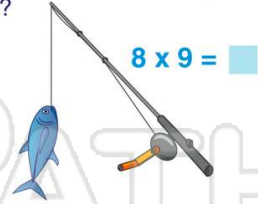
1 Kimberly talked on the phone **4 times a day for 6 days**. What number sentence would you use to find out how many times she talked on the phone?

- A  $6 \div 4$
- B  $4 \div 6$
- C  $4 \times 6$
- D  $4 + 6$



2 Jessica went fishing for **8 days**. Each day she caught **9 fish**. How many fish did she catch?

- A 17
- B 72
- C 89
- D 81



3 Samuel has **22 pieces of candy** in bags. Each bag has **2 pieces** inside. How many bags of candy does he have?

- A 11



4 Mike has a total of **100 pizzas**. He needs to deliver an equal amount of pizzas to **10 houses**. To find out how many pizzas each house gets, what number sentence

5



## PREVIEW

Please [Sign In](#) or [Sign Up](#) to download the printable version of this worksheet

7

- A  $20 \div 2$
- B  $20 \times 2$
- C  $2 \div 20$
- D  $2 + 20$

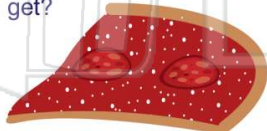


- B 50
- C 11
- D 55



9 We had **16 pieces** of pizza. There were **8 people** at the party. If each person received the same amount of pizza slices, how many slices did each person get?

- A 1
- B 2
- C 3
- D 4



10 The teacher has **25 pencils**. Each student received **5 pencils**. What number sentence would you use to find out how many students there are?

- A  $25 \div 5$
- B  $25 \times 5$
- C  $25 + 5$
- D  $25 - 5$





Name \_\_\_\_\_ Class \_\_\_\_\_ Date \_\_\_\_\_

1 Kimberly talked on the phone **4 times a day for 6 days**. What number sentence would you use to find out how many times she talked on the phone?

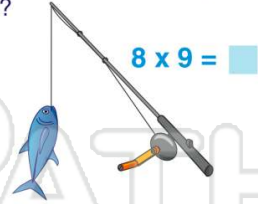
- A  $6 \div 4$
- B  $4 \div 6$
- C  $4 \times 6$
- D  $4 + 6$



(C)

2 Jessica went fishing for **8 days**. Each day she caught **9 fish**. How many fish did she catch?

- A 17
- B 72
- C 89
- D 81



(B)

3 Samuel has **22 pieces of candy** in bags. Each bag has **2 pieces** inside. How many bags of candy does he have?

- A 11



(A)

4 Mike has a total of **100 pizzas**. He needs to deliver an equal amount of pizzas to **10 houses**. To find out how many pizzas each house gets, what number sentence

(D)



(A)

## PREVIEW

Please [Sign In](#) or [Sign Up](#) to download the printable version of this worksheet

7

- A  $20 \div 2$
- B  $20 \times 2$
- C  $2 \div 20$
- D  $2 + 20$



(B)

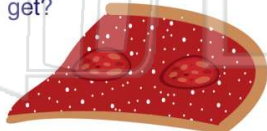
- B 50
- C 11
- D 55



(D)

9 We had **16 pieces** of pizza. There were **8 people** at the party. If each person received the same amount of pizza slices, how many slices did each person get?

- A 1
- B 2
- C 3
- D 4



(B)

10 The teacher has **25 pencils**. Each student received **5 pencils**. What number sentence would you use to find out how many students there are?

- A  $25 \div 5$
- B  $25 \times 5$
- C  $25 + 5$
- D  $25 - 5$



(A)