



Name \_\_\_\_\_ Class \_\_\_\_\_ Date \_\_\_\_\_

1 Identify the **angle** as right, straight, obtuse, or acute.

- A obtuse
- B right
- C acute
- D straight



2 Identify the **angle** as right, straight, obtuse, or acute.

- A obtuse
- B right
- C acute
- D straight



3 Identify the **angle** as right, straight, obtuse, or acute.

- A obtuse
- B right



4 Identify the **angle** as right, straight, obtuse, or acute.



## PREVIEW

7 Please [Sign In](#) or [Sign Up](#) to download the printable version of this worksheet

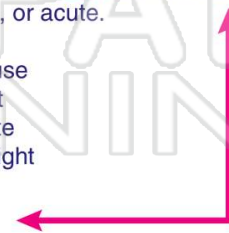
9 Identify the **angle** as right, straight, obtuse, or acute.

- A obtuse
- B right
- C acute
- D straight



10 Identify the **angle** as right, straight, obtuse, or acute.

- A obtuse
- B right
- C acute
- D straight






Name \_\_\_\_\_ Class \_\_\_\_\_ Date \_\_\_\_\_

1 Identify the **angle** as right, straight, obtuse, or acute.

- A obtuse
- B right
- C acute
- D straight



(C)

2 Identify the **angle** as right, straight, obtuse, or acute.

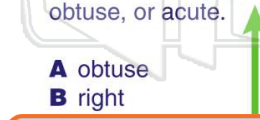
- A obtuse
- B right
- C acute
- D straight



(A)

3 Identify the **angle** as right, straight, obtuse, or acute.

- A obtuse
- B right



(B)

4 Identify the **angle** as right, straight, obtuse, or acute.



(D)

5



(A)

## PREVIEW

Please [Sign In](#) or [Sign Up](#) to download the printable version of this worksheet

7

- C acute
- D straight

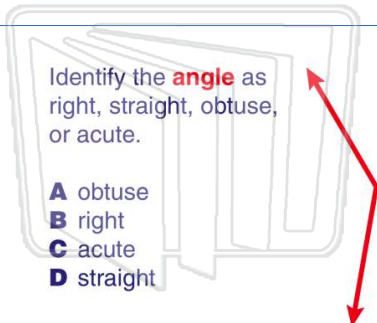
- B right
- C acute
- D straight

(D)

9

Identify the **angle** as right, straight, obtuse, or acute.

- A obtuse
- B right
- C acute
- D straight

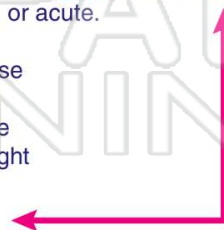


(A)

10

Identify the **angle** as right, straight, obtuse, or acute.

- A obtuse
- B right
- C acute
- D straight



(B)