



Lines & Angles

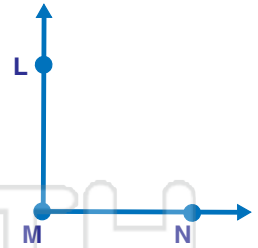
Math

Name _____ Class _____ Date _____

1 Which set of lines is **intersecting**?
Circle them.



6 Name a **ray** that is contained in the following angle.



2 Which set of lines is **perpendicular**?
Circle them.



7 Circle the **indicated angle** for the geometric shape.



3

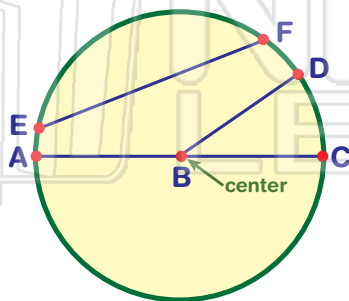


PREVIEW

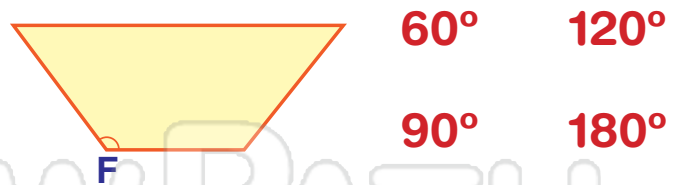
Please [Sign In](#) or [Sign Up](#) to download the printable version of this worksheet

4

5 Name the **line segment** that indicates the **diameter**.



10 Identify the angle as **right**, **straight**, **obtuse**, or **acute**.



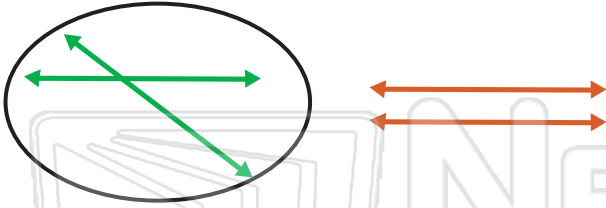


Lines & Angles - Answer Key

Math

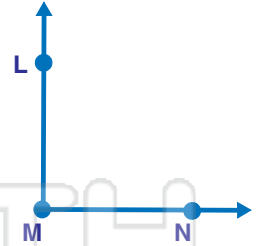
Name _____ Class _____ Date _____

- 1 Which set of lines is **intersecting**?
Circle them.



- 6 Name a **ray** that is contained in the following angle.

ML or MN



- 2 Which set of lines is **perpendicular**?
Circle them.



- 7 Circle the **indicated angle** for the geometric shape.



- 3



PREVIEW

Please [Sign In](#) or [Sign Up](#) to download the printable version of this worksheet

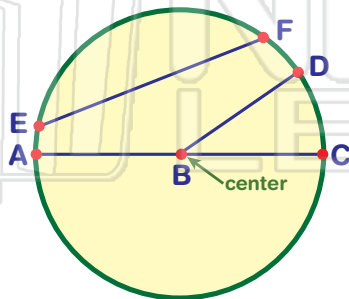
- 4

acute



- 5 Name the **line segment** that indicates the **diameter**.

AC



- 10 Identify the angle as **right**, **straight**, **obtuse**, or **acute**.

right



90° 180°

