

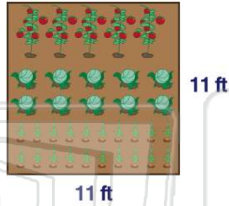


Name _____ Class _____ Date _____

1 Juan's garden is 11 feet wide and 11 feet long. What is the area of Juan's garden?

$$A = s^2$$

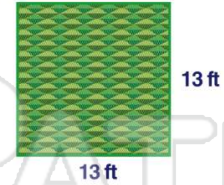
- A 22 ft²
- B 121 ft²
- C 144 ft²
- D 100 ft²



2 Maggie's bedroom is 13 feet by 13 feet. How many square feet of carpeting does Maggie need for her room?

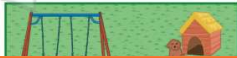
$$A = s^2$$

- A 26 ft²
- B 144 ft²
- C 130 ft²
- D 169 ft²




3 The Wilson family's backyard is 15 yards wide and 25 yards long. What is the area of the Wilson family's backyard?

$$A = \ell \times w$$



4 Zack's family pool is 14 feet long and 13 feet wide. What is the area of Zack's pool?

$$A = \ell \times w$$



PREVIEW

Please [Sign In](#) or [Sign Up](#) to download the printable version of this worksheet

7

B 72 ft
C 5 ft
D 48 ft

$A = 60 \text{ ft}^2$

n

B 240 ft
C 15 ft
D 3,375 ft

$A = 225 \text{ ft}^2$

15 ft

9 Find the value of n .

$A = \ell \times w$

n

$A = 1,152 \text{ cm}^2$

12 cm

- A 1,140 cm
- B 96 cm
- C 13,824 cm
- D 1,164 cm

10 Find the value of n .

$A = \ell \times w$

50 m

$A = 625 \text{ m}^2$

n

- A 12.5 m
- B 575 m
- C 675 m
- D 31,250 m

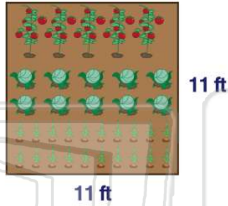


Name _____ Class _____ Date _____

1 Juan's garden is 11 feet wide and 11 feet long. What is the area of Juan's garden?

$A = s^2$

- A 22 ft²
- B 121 ft²
- C 144 ft²
- D 100 ft²

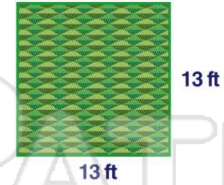


(B)

2 Maggie's bedroom is 13 feet by 13 feet. How many square feet of carpeting does Maggie need for her room?

$A = s^2$

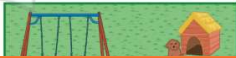
- A 26 ft²
- B 144 ft²
- C 130 ft²
- D 169 ft²



(D)

3 The Wilson family's backyard is 15 yards wide and 25 yards long. What is the area of the Wilson family's backyard?


$A = \ell \times w$



(C)

4 Zack's family pool is 14 feet long and 13 feet wide. What is the area of Zack's pool?

$A = \ell \times w$



(A)



5 (A) (B) (C)

PREVIEW

Please [Sign In](#) or [Sign Up](#) to download the printable version of this worksheet

7 (A) (B) (C)

B 72 ft
C 5 ft
D 48 ft

$A = 60 \text{ ft}^2$

n

B 240 ft
C 15 ft
D 3,375 ft

$A = 225 \text{ ft}^2$

15 ft

9 Find the value of n .

$A = \ell \times w$

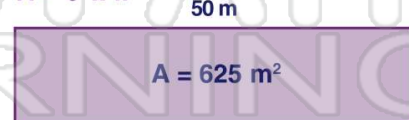


- A 1,140 cm
- B 96 cm
- C 13,824 cm
- D 1,164 cm

(B)

10 Find the value of n .

$A = \ell \times w$



- A 12.5 m
- B 575 m
- C 675 m
- D 31,250 m

(A)