



Name _____ Class _____ Date _____

1 Suzie and her three friends run every day. Suzie runs $\frac{3}{10}$ mile, Mark runs $\frac{2}{10}$ mile, Jenn runs $\frac{8}{10}$ mile, and Tom runs $\frac{5}{10}$ mile. Who runs the farthest?

- A Suzie C Jenn
B Tom D Mark



2 Todd bought 4 bags of groceries, weighing $\frac{3}{4}$ lb, $\frac{4}{6}$ lb, $\frac{1}{2}$ lb and $\frac{7}{8}$ lb. Order the grocery bags from **least to greatest**.

- A $\frac{1}{2}$ $\frac{3}{4}$ $\frac{4}{6}$ $\frac{7}{8}$ C $\frac{3}{4}$ $\frac{4}{6}$ $\frac{1}{2}$ $\frac{7}{8}$
B $\frac{1}{2}$ $\frac{4}{6}$ $\frac{3}{4}$ $\frac{7}{8}$ D $\frac{7}{8}$ $\frac{3}{4}$ $\frac{1}{2}$ $\frac{4}{6}$

3 Becky's favorite cookie recipe calls for the following ingredients: $\frac{1}{2}$ cup of sugar, $\frac{3}{4}$ cup of chocolate chips, $\frac{2}{3}$ cup milk, and $\frac{1}{4}$ cup shortening. What ingredient does

4 Tammy and her friends leave for school at the same time each day. It takes Tammy $\frac{1}{12}$ hour to get to school. It takes Greg $\frac{1}{4}$ hour, Heidi $\frac{1}{6}$ hour, and Danny $\frac{1}{8}$ hour.



PREVIEW

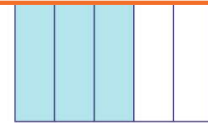
7 Please [Sign In](#) or [Sign Up](#) to download the printable version of this worksheet

What ingredient did they put on the least?

- A pepperoni C onions
B peppers D pineapple

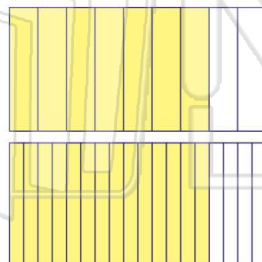


- A true
B false



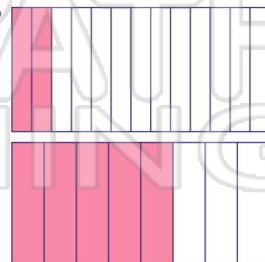
9 True or false? $\frac{7}{9} = \frac{14}{18}$

- A true
B false



10 True or false? $\frac{2}{13} = \frac{5}{8}$

- A true
B false





Compare and Order Fractions

Math

Name _____ Class _____ Date _____

1 Suzie and her three friends run every day. Suzie runs $\frac{3}{10}$ mile, Mark runs $\frac{2}{10}$ mile, Jenn runs $\frac{8}{10}$ mile, and Tom runs $\frac{5}{10}$ mile. Who runs the farthest?

- A Suzie C Jenn
B Tom D Mark



C

2 Todd bought 4 bags of groceries, weighing $\frac{3}{4}$ lb, $\frac{4}{6}$ lb, $\frac{1}{2}$ lb and $\frac{7}{8}$ lb. Order the grocery bags from least to greatest.

- A $\frac{1}{2}$ $\frac{3}{4}$ $\frac{4}{6}$ $\frac{7}{8}$ C $\frac{3}{4}$ $\frac{4}{6}$ $\frac{1}{2}$ $\frac{7}{8}$
B $\frac{1}{2}$ $\frac{4}{6}$ $\frac{3}{4}$ $\frac{7}{8}$ D $\frac{7}{8}$ $\frac{3}{4}$ $\frac{1}{2}$ $\frac{4}{6}$

B

3 Becky's favorite cookie recipe calls for the following ingredients: $\frac{1}{2}$ cup of sugar, $\frac{3}{4}$ cup of chocolate chips, $\frac{2}{3}$ cup milk, and $\frac{1}{4}$ cup shortening. What ingredient does

D

4 Tammy and her friends leave for school at the same time each day. It takes Tammy $\frac{1}{12}$ hour to get to school. It takes Greg $\frac{1}{4}$ hour, Heidi $\frac{1}{6}$ hour, and Danny $\frac{1}{8}$ hour.

A

5



D

PREVIEW

Please [Sign In](#) or [Sign Up](#) to download the printable version of this worksheet

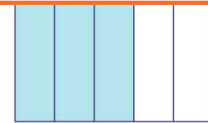
7

What ingredient did they put on the least?

- A pepperoni C onions
B peppers D pineapple



- A true
B false



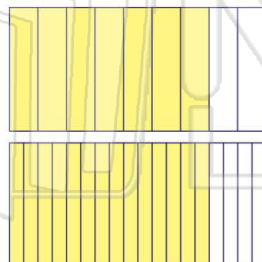
B

9

True or false?

$$\frac{7}{9} = \frac{14}{18}$$

- A true
B false



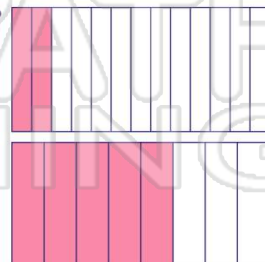
A

10

True or false?

$$\frac{2}{13} = \frac{5}{8}$$

- A true
B false



B