

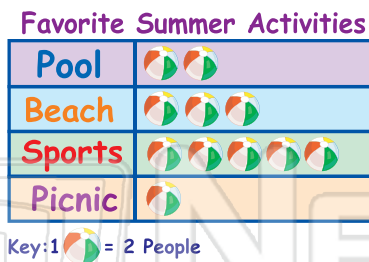


# Collecting & Displaying Data

Math

Name \_\_\_\_\_ Class \_\_\_\_\_ Date \_\_\_\_\_

1 How many people like the **beach** the best?



6 Mrs. Smith conducted a survey of **100 5th graders'** favorite after-school snacks. How many students indicated that their favorite snack is **cookies**?

Favorite Snack	% of Students
Cookie	20%
Granola Bar	15%
Candy Bar	40%
Fruit	10%
Other	15%

2 Which activity is the **least popular**?



7 Farmer Jones is able to collect **40 dozen eggs each week** from his chickens. How many eggs would Farmer Jones

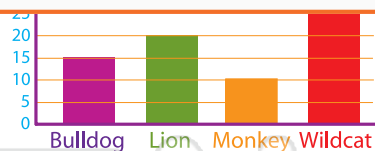
chart.

3

**PREVIEW**

Please [Sign In](#) or [Sign Up](#) to download the printable version of this worksheet

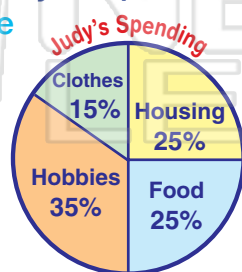
4



How many **books** would Tim read in **eight weeks**? Complete the chart.

Books	3	6	9	
Weeks	2	4	6	8

5 Below is a pie chart of Judy's expenses. What did Judy spend the most money on?



10 How many **more members** does the **soccer club** have than **chorus**?

Club Members

Soccer	
Chess	
Band	
Chorus	

Key: 1 = 4 People

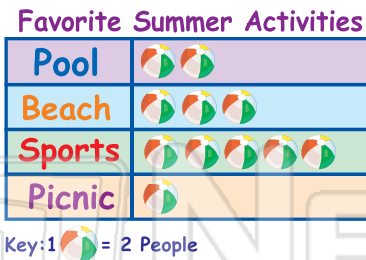


# Collecting & Displaying Data - Answer Key

Math

Name \_\_\_\_\_ Class \_\_\_\_\_ Date \_\_\_\_\_

1 How many people like the beach the best?



6

6 Mrs. Smith conducted a survey of 100 5th graders' favorite after-school snacks. How many students indicated that their favorite snack is cookies?

20

Favorite Snack	% of Students
Cookie	20%
Granola Bar	15%
Candy Bar	40%
Fruit	10%
Other	15%

2 Which activity is the least popular?



7 Farmer Jones is able to collect 40 dozen eggs each week from his chickens. How many eggs would Farmer Jones

chart.

240

6

3



of 150 indicated

students

5%

0%

0%

0%

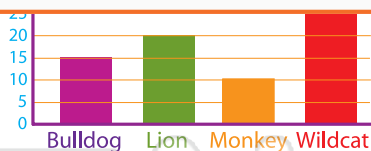
5%

4

Please [Sign In](#) or [Sign Up](#) to download the printable version of this worksheet

ks.

5

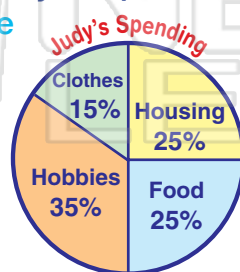


How many books would Tim read in eight weeks? Complete the chart.

Books	3	6	9	12
Weeks	2	4	6	8

5 Below is a pie chart of Judy's expenses. What did Judy spend the most money on?

Hobbies



10 How many more members does the soccer club have than chorus?

8

Club Members

Soccer	
Chess	
Band	
Chorus	

Key: 1 = 4 People