






Name _____ Class _____ Date _____

1 Marcus has 232 tomato plants. He plants them in rows with 8 plants in each row. How many rows can he plant?

- A  28
- B  29
- C  19
- D  30

2 There are 23 students in Mrs. Holly's class. She gave her class a jar of candy with 328 pieces. How many pieces of candy will each student receive if Mrs. Holly shares the candy equally among the students?

- A 15
- B 13
- C 14
- D 9



3 Mrs. King is organizing a trip to the zoo for 110 students, teachers, and parents. If each bus can seat 25 people, how many buses does she need?

4 A ride at the amusement park holds 30 people. There are 390 people waiting for a ride. How many times will the roller coaster need to run so that all 390 people get a ride?



PREVIEW

Please [Sign In](#) or [Sign Up](#) to download the printable version of this worksheet

7 A 5
B 2
C 6
D 4

$$\begin{array}{r} 30.00 \\ \div 7.5 \\ \hline \end{array}$$



- A 9
- B 7
- C 8
- D 6

$$30 \div 4 =$$



9 Mark and his father drove 578 miles to see Mark's grandmother. It took 2 days for them to get to their destination. How many miles did they drive each day?

- A 289
- B 290
- C 298
- D 278



10 Tom sold 140 boxes of candy for the school fund-raiser. The total amount of money Tom collected from his sales was \$980. What was the price of each box of candy Tom sold?

- A \$3
- B \$11




- C \$7
- D \$9

$$\begin{array}{r} \$980 \\ \div 140 \\ \hline ? \end{array}$$



Name _____ Class _____ Date _____

1 Marcus has 232 tomato plants. He plants them in rows with 8 plants in each row. How many rows can he plant?

- A  28
- B  29
- C  19
- D  30

(B)

2 There are 23 students in Mrs. Holly's class. She gave her class a jar of candy with 328 pieces. How many pieces of candy will each student receive if Mrs. Holly shares the candy equally among the students?

- A 15
- B 13
- C 14
- D 9



(C)

3 Mrs. King is organizing a trip to the zoo for 110 students, teachers, and parents. If each bus can seat 25 people, how many buses does she need?

(C)

4 A ride at the amusement park holds 30 people. There are 390 people waiting for a ride. How many times will the roller coaster need to run so that all 390 people get a ride?

(A)

5



(C)

PREVIEW

Please [Sign In](#) or [Sign Up](#) to download the printable version of this worksheet

7

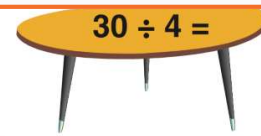
- A 5
- B 2
- C 6
- D 4

$$\frac{30.00}{\div 7.5}$$



- A 9
- B 7
- C 8
- D 6

$$30 \div 4 =$$



(C)

9 Mark and his father drove 578 miles to see Mark's grandmother. It took 2 days for them to get to their destination. How many miles did they drive each day?

- A 289
- B 290
- C 298
- D 278



(A)

10 Tom sold 140 boxes of candy for the school fund-raiser. The total amount of money Tom collected from his sales was \$980. What was the price of each box of candy Tom sold?

- A \$3
- B \$11
- C \$7
- D \$9

$$\frac{\$980}{\div 140} = ?$$

(C)