



Name _____ Class _____ Date _____

1

$600 \div 15 = \square$

- A 20
- B 30
- C 40
- D 31



2

Divide: $190 \div 21 = \square$

- A 9
- B 9 r 1
- C 90
- D 8 r 3

3

Evaluate the expression:

$216 \div 8 = 27$

A true

4

Evaluate the expression:

$888 \div 8 = 111$

A true

5

**PREVIEW**

Please [Sign In](#) or [Sign Up](#) to download the printable version of this worksheet

7

A



B



A



B



9

Evaluate the expression:

$252 \div 16 = \square$

- A 17 r 1
- B 15 r 12
- C 11 r 2
- D 9 r 8

10

Evaluate the expression:

$356 \div 5 = \square$


- A 84 r 8
- B 28 r 4
- C 71 r 1
- D 65 r 3



Name _____ Class _____ Date _____

1 $600 \div 15 = \square$

A 20
B 30
C 40
D 31



(C)

2 Divide: $190 \div 21 = \square$

A 9
B 9 r 1
C 90
D 8 r 3

(B)

3 Evaluate the expression:
 $216 \div 8 = 27$

(A)

4 Evaluate the expression:
 $888 \div 8 = 111$

(A)

5






(B)

PREVIEW

Please [Sign In](#) or [Sign Up](#) to download the printable version of this worksheet

7

A  B 

A  B 

(A)

9 Evaluate the expression:
 $252 \div 16 = \square$

A 17 r 1
B 15 r 12
C 11 r 2
D 9 r 8

(B)

10 Evaluate the expression:
 $356 \div 5 = \square$

A 84 r 8
B 28 r 4
C 71 r 1
D 65 r 3

(C)