




Name _____ Class _____ Date _____


1 Calculate the **elapsed time**.
 9:59 in the **morning** to
 2:59 in the **afternoon**

A 3 hours
 B 4 hours
 C 5 hours
 D 6 hours




2 Calculate the **elapsed time**.
 2 a.m. to 3 p.m.

A 1 hour
 B 12 hours
 C 2 hours
 D 13 hours




3 Calculate the **elapsed time**.
 8:45 in the **morning** to
 2:45 in the **afternoon**

A 2 hours



4 Calculate the **elapsed time**.
 10:35 in the **morning** to
 10:35 in the **evening**

A 12 hours



5



PREVIEW


Please [Sign In](#) or [Sign Up](#) to download
 the printable version of this worksheet

7

A 5 hours, 22 minutes
 B 4 hours, 22 minutes
 C 6 hours, 22 minutes
 D 3 hours, 22 minutes



B 20 minutes
 C 1 hour, 20 minutes
 D 30 minutes



9



Calculate the **elapsed time**.
 12:52 p.m. to 8:11 p.m.

A 7 hours, 20 minutes
 B 8 hours, 19 minutes
 C 8 hours, 20 minutes
 D 7 hours, 19 minutes




10 Calculate the **elapsed time**.
 1:01 a.m. to 4:29 a.m.

A 3 hours, 28 minutes
 B 4 hours, 28 minutes
 C 3 hours, 30 minutes
 D 4 hours, 30 minutes



Name _____ Class _____ Date _____

1 Calculate the **elapsed time**.

9:59 in the **morning** to
2:59 in the **afternoon**

- A 3 hours
- B 4 hours
- C 5 hours
- D 6 hours



C

2 Calculate the **elapsed time**.

2 a.m. to 3 p.m.

- A 1 hour
- B 12 hours
- C 2 hours
- D 13 hours



D

3 Calculate the **elapsed time**.

8:45 in the **morning** to
2:45 in the **afternoon**

- A 2 hours



B

4 Calculate the **elapsed time**.

10:35 in the **morning** to
10:35 in the **evening**

- A 12 hours



A

5



B

PREVIEW

Please [Sign In](#) or [Sign Up](#) to download the printable version of this worksheet

7

- A 5 hours, 22 minutes
- B 4 hours, 22 minutes
- C 6 hours, 22 minutes
- D 3 hours, 22 minutes



- B 20 minutes
- C 1 hour, 20 minutes
- D 30 minutes



C

9

Calculate the **elapsed time**.

12:52 p.m. to 8:11 p.m.

- A 7 hours, 20 minutes
- B 8 hours, 19 minutes
- C 8 hours, 20 minutes
- D 7 hours, 19 minutes



D

10

Calculate the **elapsed time**.

1:01 a.m. to 4:29 a.m.

- A 3 hours, 28 minutes
- B 4 hours, 28 minutes
- C 3 hours, 30 minutes
- D 4 hours, 30 minutes



A