



Measuring Time & Temperature

Math

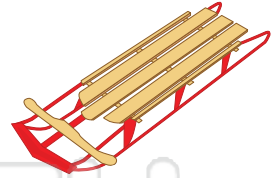
Name _____ Class _____ Date _____

1 On Monday night, Sean went to see a movie. The movie started at **6:10** and was **1 hour and 52 minutes** long. **What time did the movie end?** Circle it.

- 7:10 p.m.
- 8:02 p.m.
- 9:02 p.m.
- 8:10 p.m.

6 Which would be the best temperature for **sliding in the snow**? Circle it.

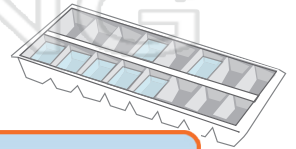
- 0°F
- 30°F
- 15°F
- 99°F



2 Joe's train to work departs each morning at **6:55**. His train takes **50 minutes** to reach the stop near his office. He walks for **17 minutes** from the train to his office.

7 What temperature does **water freeze** at? Circle it.

- 0°C
- 30°C



3



PREVIEW

Please [Sign In](#) or [Sign Up](#) to download the printable version of this worksheet

4

_____ hours, _____ minutes


- 50°C
- 100°C

5 Grace starts school at **7:10** each morning. Her class eats lunch **five hours** after school starts. **Circle the clock that shows when Grace ate lunch.**



10 Nick is going ice fishing. Which is the most likely temperature for this activity?

- 15°C
- 32°C
- 10°C
- 45°C





Measuring Time & Temperature - Answer Key

Math

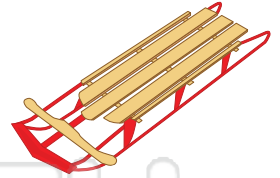
Name _____ Class _____ Date _____

1 On Monday night, Sean went to see a movie. The movie started at **6:10** and was **1 hour and 52 minutes** long. **What time did the movie end?** Circle it.

- 7:10 p.m.
- 8:02 p.m.**
- 9:02 p.m.
- 8:10 p.m.

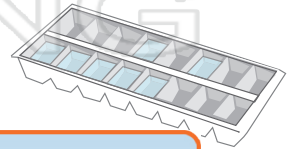
6 Which would be the best temperature for **sliding in the snow**? Circle it.

- 0°F
- 30°F**
- 15°F
- 99°F



7 What temperature does **water freeze** at? Circle it.

- 0°C**
- 30°C



2 Joe's train to work departs each morning at **6:55**. His train takes **50 minutes** to reach the stop near his office. He walks for **17 minutes** from the train

3



PREVIEW

Please [Sign In](#) or [Sign Up](#) to download the printable version of this worksheet

4

5 hours, 11 minutes

- 50°C
- 100°C**



5 Grace starts school at **7:10** each morning. Her class eats lunch **five hours** after school starts. **Circle the clock that shows when Grace ate lunch.**



10 Nick is going ice fishing. Which is the most likely temperature for this activity?

- 15°C**
- 32°C
- 10°C
- 45°C

