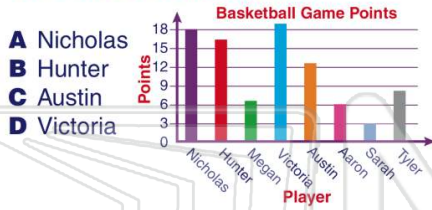


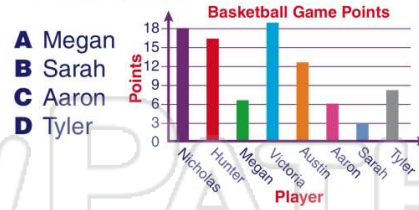


Name _____ Class _____ Date _____


1 Use the graph to answer the question.
Who scored the **most** points?



2 Use the graph to answer the question.
Which player scored **below** 6 points?



3 Which piece or pieces of rope are **more than 18 feet** long but **less than 21 feet** long?



4 If it takes nine inches of rope to go around the fence post, how many times will the **red rope** go around the post?



5



PREVIEW

Please [Sign In](#) or [Sign Up](#) to download the printable version of this worksheet

7

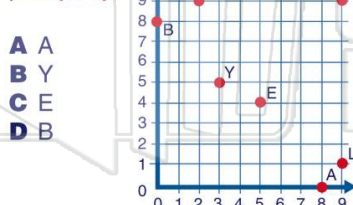
- B** 68%
- C** 35%
- D** 58%



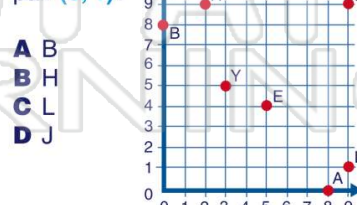
D 18

3	447
4	00158
5	35556
6	2

9 What letter represents the ordered pair **(8, 0)**?



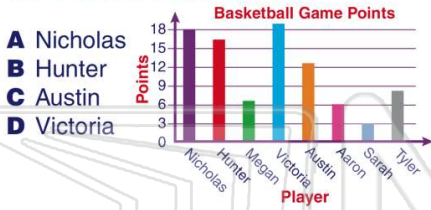
10 What letter represents the ordered pair **(9, 1)**?





Name _____ Class _____ Date _____

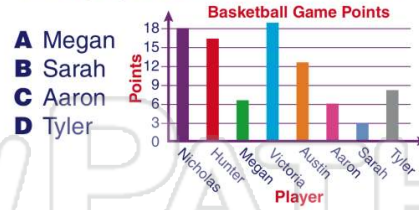
1 Use the graph to answer the question.
Who scored the **most** points?



- A Nicholas
- B Hunter
- C Austin
- D Victoria

(D)

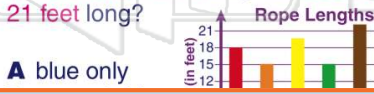
2 Use the graph to answer the question.
Which player scored **below** 6 points?



- A Megan
- B Sarah
- C Aaron
- D Tyler

(B)

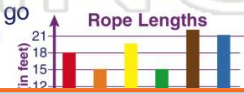
3 Which piece or pieces of rope are **more than 18 feet** long but **less than 21 feet** long?



- A blue only

(C)

4 If it takes nine inches of rope to go around the fence post, how many times will the **red rope** go around the post?



(B)



PREVIEW

Please [Sign In](#) or [Sign Up](#) to download the printable version of this worksheet

7 (C)

- B 68%
- C 35%
- D 58%

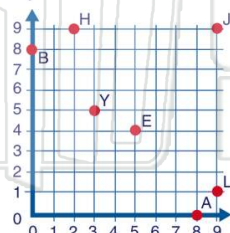


D 18

3	447
4	00158
5	35556
6	2

9 What letter represents the ordered pair **(8, 0)**?

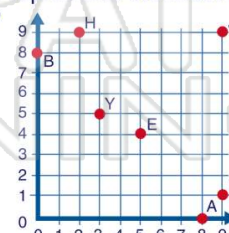
- A A
- B Y
- C E
- D B



(A)

10 What letter represents the ordered pair **(9, 1)**?

- A B
- B H
- C L
- D J



(C)