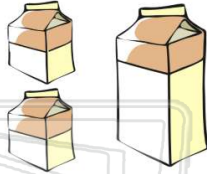




Name \_\_\_\_\_ Class \_\_\_\_\_ Date \_\_\_\_\_

1 If there are 2 pints in a quart, how many quarts is 86 pints?

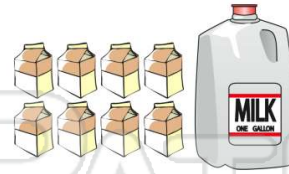
- A 86
- B 43
- C 172
- D 22



2 pints = 1 quart

2 If there are 8 pints in one gallon, how many pints are there in 7 gallons?

- A 56
- B 15
- C 28
- D 1



8 pints = 1 gallon

3 What letter indicates  $\frac{3}{4}$  inch?

- A J
- B K

1 2 3

4 What letter indicates  $5\frac{1}{8}$  inches?

- A X
- B Y

5 6 7

5



## PREVIEW

Please [Sign In](#) or [Sign Up](#) to download the printable version of this worksheet

7

- B B
- C C
- D D



A B C D

- B N
- C L
- D M



J K L M

9

What letter indicates  $1\frac{5}{8}$  inches?

- A A
- B B
- C C
- D D



A B C D

10

What letter indicates  $5\frac{2}{8}$  inches?

- A A
- B B
- C C
- D D



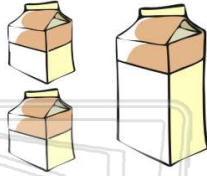
A B C D



Name \_\_\_\_\_ Class \_\_\_\_\_ Date \_\_\_\_\_

1 If there are 2 pints in a quart, how many quarts is 86 pints?

- A 86
- B 43
- C 172
- D 22

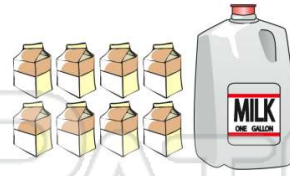


2 pints = 1 quart

(B)

2 If there are 8 pints in one gallon, how many pints are there in 7 gallons?

- A 56
- B 15
- C 28
- D 1



8 pints = 1 gallon

(A)

3 What letter indicates  $\frac{3}{4}$  inch?

- A J
- B K

1 2 3

(B)

4 What letter indicates  $5\frac{1}{8}$  inches?

- A X
- B Y

5 6 7

(A)

5



(A)

## PREVIEW

Please [Sign In](#) or [Sign Up](#) to download the printable version of this worksheet

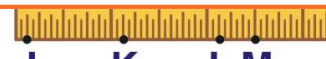
7

- B B
- C C
- D D



A B C D

- B N
- C L
- D M



J K L M

(C)

9 What letter indicates  $1\frac{5}{8}$  inches?

- A A
- B B
- C C
- D D



A B C D

(D)

10 What letter indicates  $5\frac{2}{8}$  inches?

- A A
- B B
- C C
- D D



A B C D

(C)