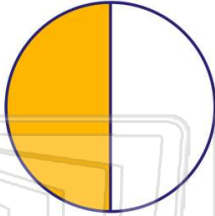




Name \_\_\_\_\_ Class \_\_\_\_\_ Date \_\_\_\_\_


1 What decimal is equal to 50%?

- A 0.050
- B 0.05
- C 0.50
- D 0.005



2 What decimal is equal to 70%?

- A 0.70
- B 0.07
- C 0.007
- D 70.0



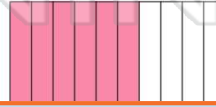
3 What decimal is equal to 20%?

- A 20.0
- B 0.20
- C 0.002



4 What decimal is equal to 60%?


- A 60.0
- B 0.60
- C 0.600




## PREVIEW

7 Please [Sign In](#) or [Sign Up](#) to download the printable version of this worksheet

D 0.099

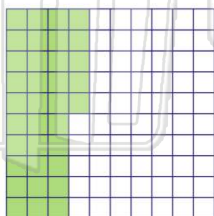


D 0.15



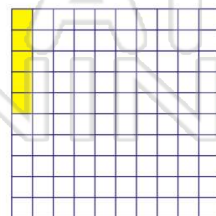
9 What decimal is equal to 35%?

- A 35.0
- B 0.35
- C 0.035
- D 0.0035



10 What decimal is equal to 5%?

- A 5.0
- B 0.5
- C 0.05
- D 0.005

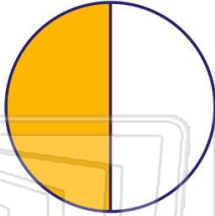




Name \_\_\_\_\_ Class \_\_\_\_\_ Date \_\_\_\_\_

1 What decimal is equal to 50%?


- A 0.050
- B 0.05
- C 0.50
- D 0.005



(C)

2 What decimal is equal to 70%?

- A 0.70
- B 0.07
- C 0.007
- D 70.0



(A)

3 What decimal is equal to 20%?

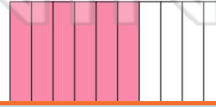
- A 20.0
- B 0.20
- C 0.002



(B)

4 What decimal is equal to 60%?

- A 60.0
- B 0.60
- C 0.600



(B)

5




(A)

## PREVIEW

Please [Sign In](#) or [Sign Up](#) to download the printable version of this worksheet


7

- D 0.099



(C)

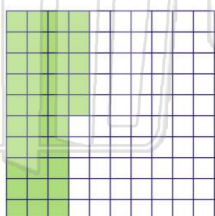
- D 0.15



(D)

9 What decimal is equal to 35%?

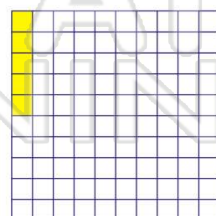
- A 35.0
- B 0.35
- C 0.035
- D 0.0035



(B)

10 What decimal is equal to 5%?

- A 5.0
- B 0.5
- C 0.05
- D 0.005



(C)