



Name _____ Class _____ Date _____

1 Write the percent as a **fraction**.




- A $\frac{5}{10}$ B $\frac{55}{100}$ C $\frac{55}{10}$ D $\frac{5}{100}$

2 Write the percent as a **fraction**.



- A $\frac{5}{10}$ B $\frac{5}{100}$ C $\frac{50}{100}$ D $\frac{5}{1}$

3 Write the percent as a **fraction**.



4 Write the percent as a **fraction**.



5



PREVIEW

Please [Sign In](#) or [Sign Up](#) to download the printable version of this worksheet

7

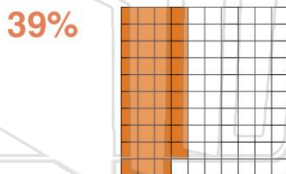


- A $\frac{68}{1000}$ B $\frac{68}{100}$ C $\frac{68}{1}$ D $\frac{6.8}{100}$



- A $\frac{83}{100}$ B $\frac{83}{1}$ C $\frac{83}{1000}$ D $\frac{8.3}{100}$

9 Write the percent as a **fraction**.



- A $\frac{39}{1}$ B $\frac{3.9}{100}$ C $\frac{39}{100}$ D $\frac{39}{1000}$

10



- A $\frac{9}{1}$ B $\frac{9}{10}$ C $\frac{9}{100}$ D $\frac{9}{1000}$



Name _____ Class _____ Date _____

1 Write the percent as a **fraction**.




- A $\frac{5}{10}$ B $\frac{55}{100}$ C $\frac{55}{10}$ D $\frac{5}{100}$

2 Write the percent as a **fraction**.



- A $\frac{5}{10}$ B $\frac{5}{100}$ C $\frac{50}{100}$ D $\frac{5}{1}$

3 Write the percent as a **fraction**.



11%

4 Write the percent as a **fraction**.



92%

5



PREVIEW

Please [Sign In](#) or [Sign Up](#) to download the printable version of this worksheet

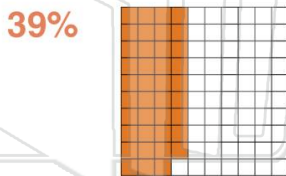
7



- A $\frac{68}{1000}$ B $\frac{68}{100}$ C $\frac{68}{1}$ D $\frac{6.8}{100}$

- A $\frac{83}{100}$ B $\frac{83}{1}$ C $\frac{83}{1000}$ D $\frac{8.3}{100}$

9 Write the percent as a **fraction**.



- A $\frac{39}{1}$ B $\frac{3.9}{100}$ C $\frac{39}{100}$ D $\frac{39}{1000}$

10 Write the percent as a **fraction**.

9%

- A $\frac{9}{1}$ B $\frac{9}{10}$ C $\frac{9}{100}$ D $\frac{9}{1000}$