

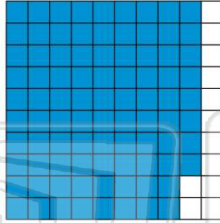


Name _____ Class _____ Date _____

1 Write the decimal as a **percent**.

0.88

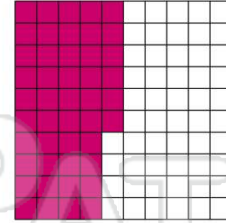
- A 8.8%
- B 80%
- C 88%
- D 880%



2 Write the decimal as a **percent**.

0.46

- A 46%
- B 4.6%
- C 460%
- D 40%



3 Write the decimal as a **percent**.


0.04



4 Write the decimal as a **percent**.

1.0

- A 100%



5

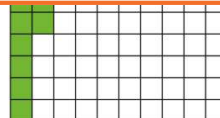


PREVIEW


Please [Sign In](#) or [Sign Up](#) to download the printable version of this worksheet

7

- A 0.16%
- B 160%
- C 16%
- D 1.6%




- A 2.4%
- B 240%
- C 0.24%
- D 24%



9 Write the fraction as a **percent**.

$\frac{100}{100}$


- A 1%
- B 10%
- C 100%
- D 0.1%



10 Write the fraction as a **percent**.

$\frac{0}{100}$

- A 100%
- B 1%
- C 10%
- D 0%



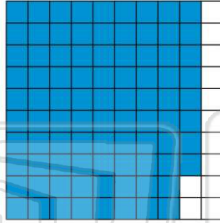


Name _____ Class _____ Date _____

1 Write the decimal as a **percent**.

0.88

- A 8.8%
- B 80%
- C 88%
- D 880%

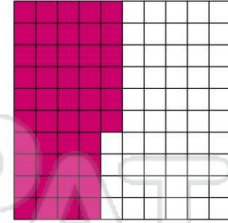


(C)

2 Write the decimal as a **percent**.

0.46

- A 46%
- B 4.6%
- C 460%
- D 40%



(A)

3 Write the decimal as a **percent**.

0.04




(C)

4 Write the decimal as a **percent**.

1.0

- A 100%



(A)

5



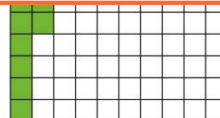
(B)

PREVIEW

Please [Sign In](#) or [Sign Up](#) to download the printable version of this worksheet


7

- A 0.16%
- B 160%
- C 16%
- D 1.6%



(C)

- A 2.4%
- B 240%
- C 0.24%
- D 24%




(D)

9 Write the fraction as a **percent**.

$\frac{100}{100}$

- A 1%
- B 10%
- C 100%
- D 0.1%




(C)

10 Write the fraction as a **percent**.

$\frac{0}{100}$

- A 100%
- B 1%
- C 10%
- D 0%



(D)