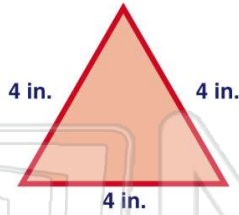




Name \_\_\_\_\_ Class \_\_\_\_\_ Date \_\_\_\_\_

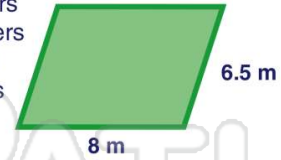
1 Find the **perimeter** of this polygon.

- A 4 inches
- B 12 inches
- C 32 inches
- D 64 inches

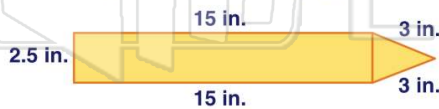


2 What is the **perimeter** of this polygon?

- A 14.5 meters
- B 2704 meters
- C 29 meters
- D 1.5 meters



3 Find the **perimeter** of the polygon.



4 Find the **perimeter** of the polygon.

- A 1.2 millimeters
- B 12 millimeters
- C 20 millimeters



5



## PREVIEW

Please [Sign In](#) or [Sign Up](#) to download the printable version of this worksheet

7

12 mm

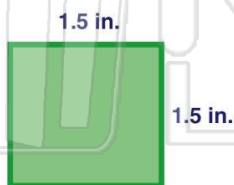
- A 42 mm
- B 422 mm
- C 2.42 mm
- D 0.422 mm

D 2,500 cm

10 cm

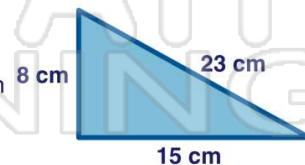
9 Find the **perimeter** of the polygon.

- A 3 inches
- B 4 inches
- C 6 inches
- D 5.06 inches



10 Find the **perimeter** of the polygon.

- A 46 cm
- B 327 cm
- C 5,040 cm
- D 43 cm

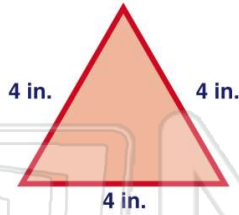




Name \_\_\_\_\_ Class \_\_\_\_\_ Date \_\_\_\_\_

1 Find the **perimeter** of this polygon.

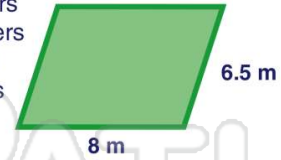
- A 4 inches
- B 12 inches
- C 32 inches
- D 64 inches



(B)

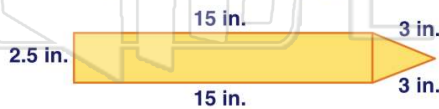
2 What is the **perimeter** of this polygon?

- A 14.5 meters
- B 2704 meters
- C 29 meters
- D 1.5 meters



(C)

3 Find the **perimeter** of the polygon.



(B)

4 Find the **perimeter** of the polygon.

- A 1.2 millimeters
- B 12 millimeters
- C 20 millimeters



(C)

5



(C)

## PREVIEW

Please [Sign In](#) or [Sign Up](#) to download the printable version of this worksheet

7

12 mm

- A 42 mm
- B 422 mm
- C 2.42 mm
- D 0.422 mm

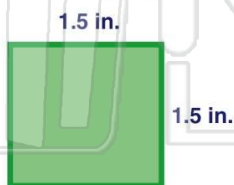
D 2,500 cm

10 cm

(A)

9 Find the **perimeter** of the polygon.

- A 3 inches
- B 4 inches
- C 6 inches
- D 5.06 inches



(C)

10 Find the **perimeter** of the polygon.

- A 46 cm
- B 327 cm
- C 5,040 cm
- D 43 cm



(A)