



Name _____ Class _____ Date _____


1 Identify the **quadrilateral**:

- A square
- B rectangle
- C rhombus
- D trapezoid



2 Identify the **quadrilateral**:

- A square
- B rectangle
- C rhombus
- D trapezoid




3 Identify the **quadrilateral**:

- A square
- B rectangle
- C rhombus



4 Identify the **quadrilateral**:

- A square
- B rectangle
- C rhombus



5



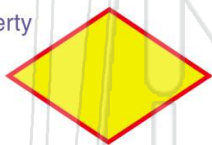
PREVIEW

7

Please [Sign In](#) or [Sign Up](#) to download the printable version of this worksheet

9 Which is **not** a property of a **rhombus**?

- A all angles are equal size
- B opposite sides are the same length
- C opposite sides are parallel
- D no angles are right angles



10 Which is **not** a property of a **trapezoid**?

- A all angles are equal size
- B no angles are right angles
- C one pair of parallel sides
- D opposite angles are equal





Name _____ Class _____ Date _____

1 Identify the **quadrilateral**:


- A square
- B rectangle
- C rhombus
- D trapezoid



(B)

2 Identify the **quadrilateral**:

- A square
- B rectangle
- C rhombus
- D trapezoid



(C)

3 Identify the **quadrilateral**:


- A square
- B rectangle
- C rhombus



(D)

4 Identify the **quadrilateral**:

- A square
- B rectangle
- C rhombus



(A)

5



(C)

PREVIEW

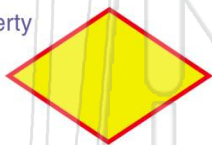
Please [Sign In](#) or [Sign Up](#) to download the printable version of this worksheet

7

(D)

9 Which is **not** a property of a **rhombus**?

- A all angles are equal size
- B opposite sides are the same length
- C opposite sides are parallel
- D no angles are right angles



(A)

10 Which is **not** a property of a **trapezoid**?

- A all angles are equal size
- B no angles are right angles
- C one pair of parallel sides
- D opposite angles are equal



(A)