



Name _____ Class _____ Date _____

1 Squares are rectangles.



A true
B false

2 Rectangles can be squares.



A true
B false

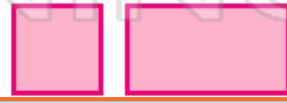
3 All quadrilaterals have four parallel sides.

A true
B false



4 All quadrilaterals have four sides.

A true
B false



5



PREVIEW

Please [Sign In](#) or [Sign Up](#) to download the printable version of this worksheet

7

A true
B false

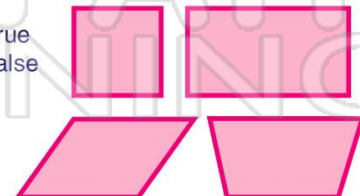
9 The angles of squares and rectangles are right angles.



A true
B false

10 Some quadrilaterals have only one set of parallel lines.

A true
B false





Name _____ Class _____ Date _____

1 Squares are rectangles.



A

A true
B false

2 Rectangles can be squares.



B

A true
B false


3 All quadrilaterals have four parallel sides.



B

A true
B false

4 All quadrilaterals have four sides.



A

A true
B false

5



B

PREVIEW

Please [Sign In](#) or [Sign Up](#) to download the printable version of this worksheet

7

A

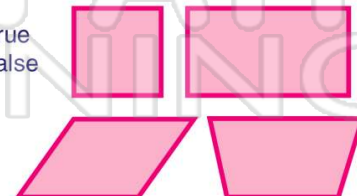
9 The angles of squares and rectangles are right angles.



A

A true
B false

10 Some quadrilaterals have only one set of parallel lines.



A

A true
B false