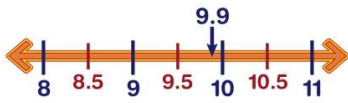




Name \_\_\_\_\_ Class \_\_\_\_\_ Date \_\_\_\_\_

1 Round to the nearest whole number: 9.9



- A 10
- B 9
- C 11
- D 8

2 Round to the nearest whole number.

- A 2
- B 4
- C 3
- D 0



3 Round to the nearest whole number.

- A 0
- B 1
- C 2



4 Round to the nearest whole number: 8.4

- A 8
- B 7
- C 9



5



## PREVIEW

Please [Sign In](#) or [Sign Up](#) to download the printable version of this worksheet

7

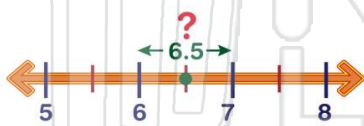
D 9 6 6.5 7 7.5 8 8.5 9

D 3



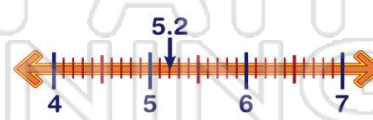
9 Round to the nearest whole number: 6.5

- A 8
- B 7
- C 6
- D 5



10 Round to the nearest whole number: 5.2

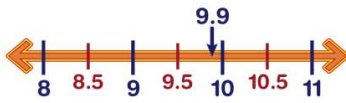
- A 4
- B 6
- C 5
- D 7





Name \_\_\_\_\_ Class \_\_\_\_\_ Date \_\_\_\_\_

1 Round to the nearest whole number: 9.9



- A 10
- B 9
- C 11
- D 8

(A)

2 Round to the nearest whole number.

- A 2
- B 4
- C 3
- D 0



(C)

3 Round to the nearest whole number.

- A 0
- B 1
- C 2



(B)

4 Round to the nearest whole number: 8.4

- A 8
- B 7
- C 9



(A)

5



(C)

## PREVIEW

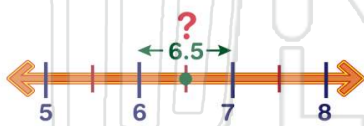
Please [Sign In](#) or [Sign Up](#) to download the printable version of this worksheet

7

(B)

9 Round to the nearest whole number: 6.5

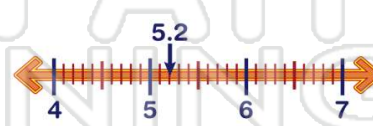
- A 8
- B 7
- C 6
- D 5



(B)

10 Round to the nearest whole number: 5.2

- A 4
- B 6
- C 5
- D 7



(C)