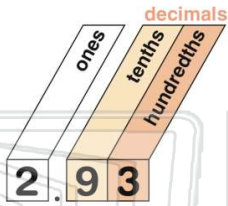




Name \_\_\_\_\_ Class \_\_\_\_\_ Date \_\_\_\_\_

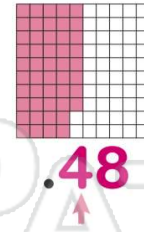
1 Round to the nearest tenth: 2.93

- A 2.9
- B 2.94
- C 3
- D 2.8



2 Round to the nearest tenth: 0.48

- A 1
- B 0.3
- C 0.4
- D 0.5



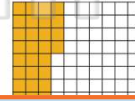
3 Round to the nearest tenth: 9.03

- A 9
- B 9.1
- C 9.9



4 Round to the nearest tenth: 0.34

- A 0.4
- B 0.3
- C 0.35



5



## PREVIEW

Please [Sign In](#) or [Sign Up](#) to download the printable version of this worksheet

7

D 3.07

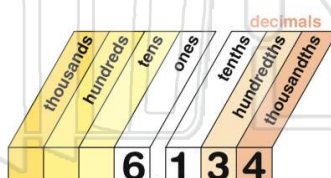


D 9.7



9 Round to the nearest hundredth: 6.134

- A 6.14
- B 6.00
- C 6.13
- D 6.12



10 Round to the nearest hundredth.

- A 1.28
- B 1.27
- C 2.00
- D 1.30

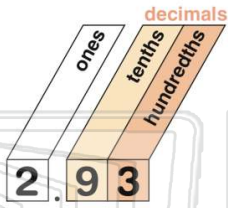




Name \_\_\_\_\_ Class \_\_\_\_\_ Date \_\_\_\_\_

1 Round to the nearest tenth: 2.93

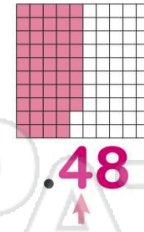
- A 2.9
- B 2.94
- C 3
- D 2.8



(A)

2 Round to the nearest tenth: 0.48

- A 1
- B 0.3
- C 0.4
- D 0.5



(D)

3 Round to the nearest tenth: 9.03

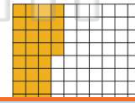
- A 9
- B 9.1
- C 9.9



(B)

4 Round to the nearest tenth: 0.34

- A 0.4
- B 0.3
- C 0.35



(B)



5

## PREVIEW

Please [Sign In](#) or [Sign Up](#) to download the printable version of this worksheet

7

D 3.07

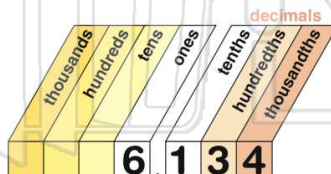


D 9.7



9 Round to the nearest hundredth: 6.134

- A 6.14
- B 6.00
- C 6.13
- D 6.12



(C)

10 Round to the nearest hundredth.

- A 1.28
- B 1.27
- C 2.00
- D 1.30



(A)