

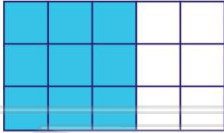


Simplify Fractions

Math

Name _____ Class _____ Date _____

1 The simplest form of $\frac{9}{15}$ is .



- A $\frac{3}{5}$ B $\frac{2}{5}$ C $\frac{9}{15}$ D $\frac{4}{5}$

2 The simplest form of $\frac{7}{35}$ is .

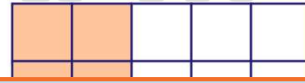
A $\frac{3}{5}$ C $\frac{7}{5}$

B $\frac{2}{5}$ D $\frac{1}{5}$

3 The simplest form of $\frac{3}{27}$ is .

A $\frac{3}{9}$ C $\frac{3}{27}$

4 The simplest form of $\frac{4}{10}$ is .




PREVIEW

Please [Sign In](#) or [Sign Up](#) to download the printable version of this worksheet

5 B $\frac{1}{6}$ D $\frac{1}{7}$

B $\frac{1}{5}$ D $\frac{1}{3}$

9 The simplest form of $\frac{12}{36}$ is .



- A $\frac{3}{5}$ B $\frac{2}{5}$ C $\frac{1}{3}$ D $\frac{2}{3}$

10 The simplest form of $\frac{6}{9}$ is .

A $\frac{1}{3}$ C $\frac{6}{9}$

B $\frac{2}{3}$ D $\frac{1}{9}$

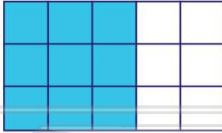


Simplify Fractions

Math

Name _____ Class _____ Date _____

1 The simplest form of $\frac{9}{15}$ is .



- A $\frac{3}{5}$ B $\frac{2}{5}$ C $\frac{9}{15}$ D $\frac{4}{5}$

(A)

2 The simplest form of $\frac{7}{35}$ is .

A $\frac{3}{5}$ C $\frac{7}{5}$

B $\frac{2}{5}$ D $\frac{1}{5}$

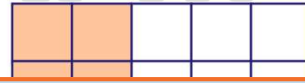
(D)

3 The simplest form of $\frac{3}{27}$ is .

A $\frac{3}{9}$ C $\frac{3}{27}$

(B)

4 The simplest form of $\frac{4}{10}$ is .



(A)



5 (D)

PREVIEW


Please [Sign In](#) or [Sign Up](#) to download the printable version of this worksheet

7 (A)

B $\frac{1}{6}$ D $\frac{1}{7}$

B $\frac{1}{5}$ D $\frac{1}{3}$

9 The simplest form of $\frac{12}{36}$ is .



- A $\frac{3}{5}$ B $\frac{2}{5}$ C $\frac{1}{3}$ D $\frac{2}{3}$

(C)

10 The simplest form of $\frac{6}{9}$ is .

A $\frac{1}{3}$ C $\frac{6}{9}$

B $\frac{2}{3}$ D $\frac{1}{9}$

(B)