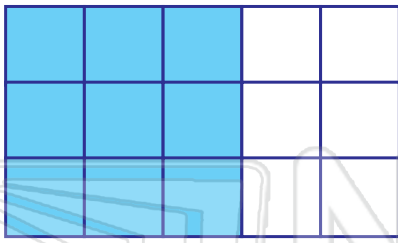




Name \_\_\_\_\_ Class \_\_\_\_\_ Date \_\_\_\_\_

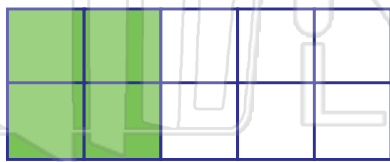
Circle the correct fraction in it's simplest form.



$$\frac{3}{18}$$

$$\frac{9}{15}$$

$$\frac{3}{5}$$



$$\frac{2}{5}$$

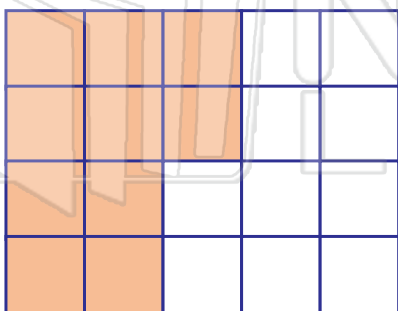
$$\frac{4}{10}$$

$$\frac{2}{10}$$



## PREVIEW

Please [Sign In](#) or [Sign Up](#) to download the printable version of this worksheet



$$\frac{10}{20}$$

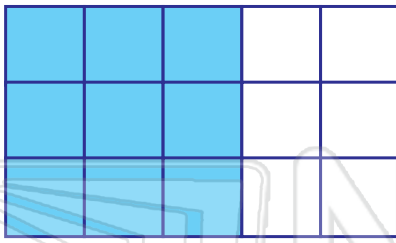
$$\frac{1}{2}$$

$$\frac{10}{2}$$



Name \_\_\_\_\_ Class \_\_\_\_\_ Date \_\_\_\_\_

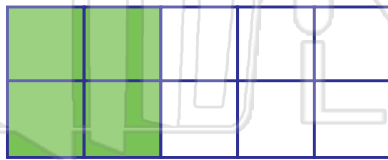
Circle the correct fraction in it's simplest form.



$$\frac{3}{18}$$

$$\frac{9}{15}$$

$$\frac{3}{5}$$



$$\frac{2}{5}$$

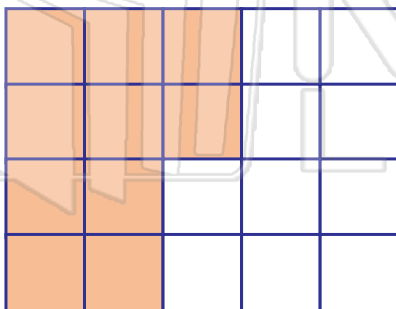
$$\frac{4}{10}$$

$$\frac{2}{10}$$



## PREVIEW

Please [Sign In](#) or [Sign Up](#) to download the printable version of this worksheet



$$\frac{10}{20}$$

$$\frac{1}{2}$$

$$\frac{10}{2}$$