

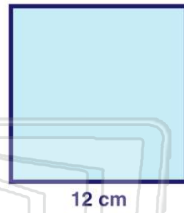


Name _____ Class _____ Date _____

1 The **area** of this square is _____ cm².

$$A = s^2$$


- A 24
- B 111
- C 144
- D 212



2 The triangle shown has an area of 40 in². **What is the height?**

$$A = \frac{1}{2} \cdot b \cdot h$$

- A 4 in.
- B 8 in.
- C 16 in.
- D 20 in.



3 What is the **area** of the following trapezoid?

$$A = \frac{1}{2} h (b_1 + b_2)$$

- A 18 cm²



4 The area of the parallelogram is 98 cm² and the height is 14 cm. **What is the size of the base?**

$$A = b \cdot h$$



5

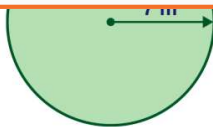


PREVIEW

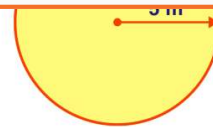
Please [Sign In](#) or [Sign Up](#) to download the printable version of this worksheet

7

- B 131.88 m²
- C 43.96 m²
- D 21.98 m²



- B 31.4 m²
- C 75 m²
- D 78.5 m²



9 A circular pool has a radius of 4 feet. **What is the area of the pool?**

$$A = \pi \cdot r^2 \quad \pi = 3.14$$

- A 12.56 ft²
- B 25.12 ft²
- C 37.68 ft²
- D 50.24 ft²



10 A circular road sign has a radius of 6 inches. **What is the area of the sign?**

$$A = \pi \cdot r^2 \quad \pi = 3.14$$

- A 43.96 in.²
- B 113.04 in.²
- C 131.88 in.²
- D 200.96 in.²



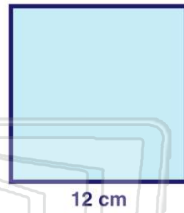


Name _____ Class _____ Date _____

1 The **area** of this square is _____ cm².

$$A = s^2$$

- A 24
- B 111
- C 144
- D 212

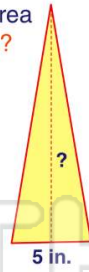


(C)

2 The triangle shown has an area of 40 in². **What is the height?**

$$A = \frac{1}{2} \cdot b \cdot h$$

- A 4 in.
- B 8 in.
- C 16 in.
- D 20 in.



(C)

3 What is the **area** of the following trapezoid?

$$A = \frac{1}{2} h (b_1 + b_2)$$

- A 18 cm²



(B)

4 The area of the parallelogram is 98 cm² and the height is 14 cm. **What is the size of the base?**

$$A = b \cdot h$$



(C)

5



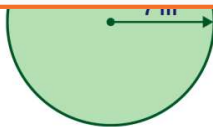
(D)

PREVIEW

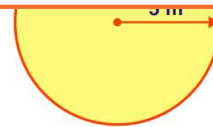
Please [Sign In](#) or [Sign Up](#) to download the printable version of this worksheet

7

- B 131.88 m²
- C 43.96 m²
- D 21.98 m²



- B 31.4 m²
- C 75 m²
- D 78.5 m²



(D)

9 A circular pool has a radius of 4 feet. **What is the area of the pool?**

$$A = \pi \cdot r^2 \quad \pi = 3.14$$

- A 12.56 ft²
- B 25.12 ft²
- C 37.68 ft²
- D 50.24 ft²



(D)

10 A circular road sign has a radius of 6 inches. **What is the area of the sign?**

$$A = \pi \cdot r^2 \quad \pi = 3.14$$

- A 43.96 in.²
- B 113.04 in.²
- C 131.88 in.²
- D 200.96 in.²



(B)