

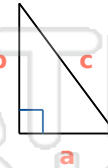
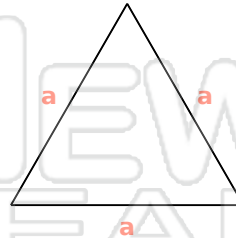
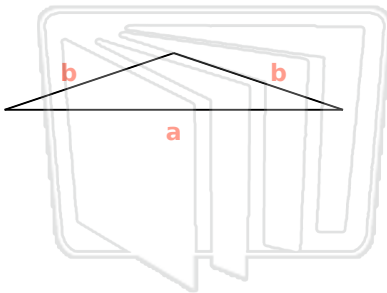


# Identifying Triangles

Math

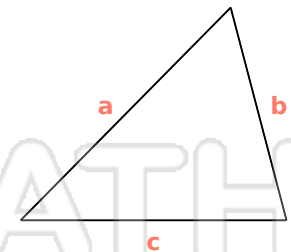
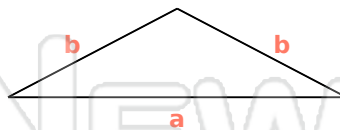
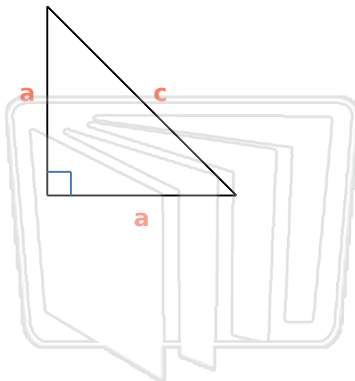
Name \_\_\_\_\_ Class \_\_\_\_\_ Date \_\_\_\_\_

Identify the Type For Each Triangle



## PREVIEW

Please [Sign In](#) or [Sign Up](#) to download the printable version of this worksheet



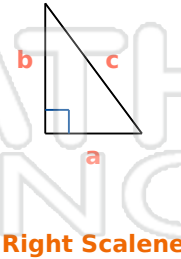
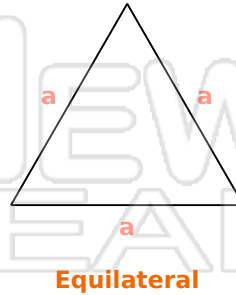
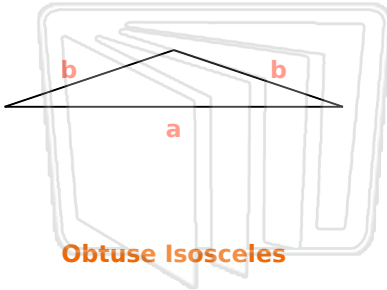


# Identifying Triangles - Answer Key

Math

Name \_\_\_\_\_ Class \_\_\_\_\_ Date \_\_\_\_\_

Identify the Type For Each Triangle



## PREVIEW

Please [Sign In](#) or [Sign Up](#) to download the printable version of this worksheet

