

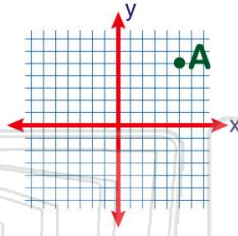


Name _____ Class _____ Date _____

1

On the grid shown, **point A** is in which **quadrant**?

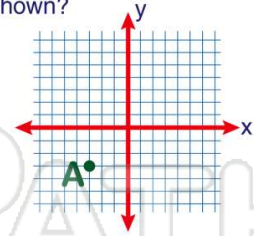
- A I
- B II
- C III
- D IV



2

Point A is located in which **quadrant** on the grid shown?

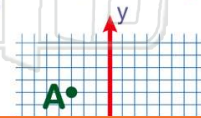
- A I
- B II
- C III
- D IV



3

On the grid shown, in which **quadrant** is **point A**?

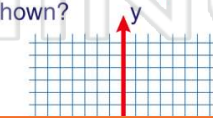
- A I
- B II



4

Point A is located in which **quadrant** on the grid shown?

- A I
- B II



5

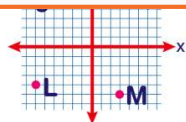


PREVIEW

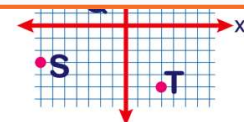
Please [Sign In](#) or [Sign Up](#) to download the printable version of this worksheet

7

- A correct
- B incorrect



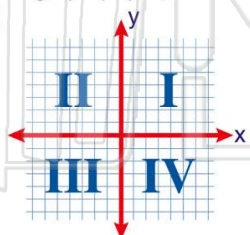
- C S
- D T



9

When plotting on graph paper, **point B (2, -3)** lies in which **quadrant**?

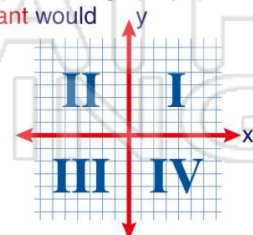
- A I
- B II
- C III
- D IV



10

Jim has to plot points on graph paper. In which **quadrant** would **point D (-3, 4)** be plotted?

- A I
- B II
- C III
- D IV

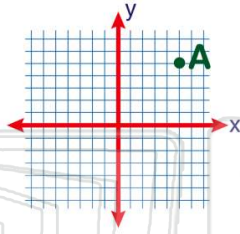




Name _____ Class _____ Date _____

1 On the grid shown, **point A** is in which quadrant?

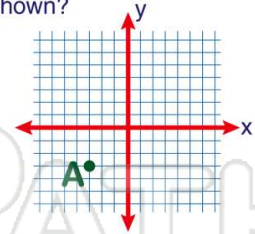
- A I
- B II
- C III
- D IV



(A)

2 **Point A** is located in which quadrant on the grid shown?

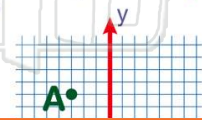
- A I
- B II
- C III
- D IV



(C)

3 On the grid shown, in which quadrant is **point A**?

- A I
- B II



(B)

4 **Point A** is located in which quadrant on the grid shown?

- A I
- B II



(D)

5



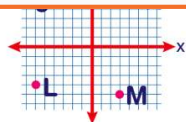
(C)

PREVIEW

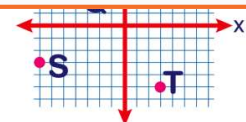
Please [Sign In](#) or [Sign Up](#) to download the printable version of this worksheet

7

- A correct
- B incorrect



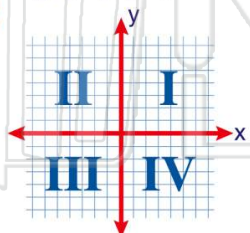
- C S
- D T



(D)

9 When plotting on graph paper, **point B (2, -3)** lies in which quadrant?

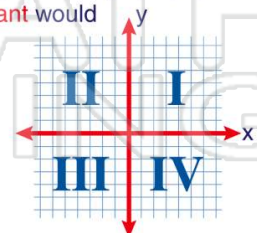
- A I
- B II
- C III
- D IV



(D)

10 Jim has to plot points on graph paper. In which quadrant would **point D (-3, 4)** be plotted?

- A I
- B II
- C III
- D IV



(B)